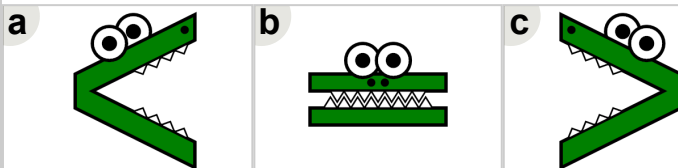
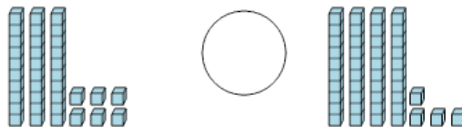




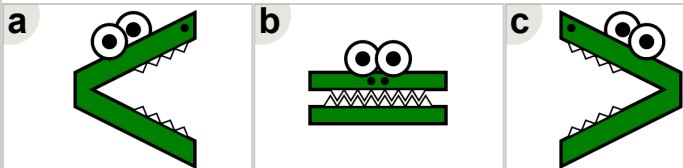
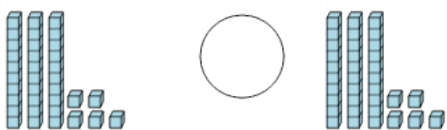
Math worksheet on 'Base 10 Blocks - Less or Greater Than - Pictures to Alligator - Tens and Ones (Level 2)'. Part of a broader unit on 'Ten Groups - Less Than, Greater Than'

Learn online: [app.mobius.academy/math/units/ten\\_groups\\_compare\\_intro/](http://app.mobius.academy/math/units/ten_groups_compare_intro/)

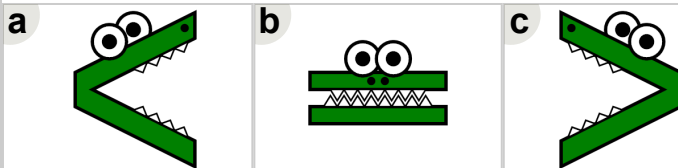
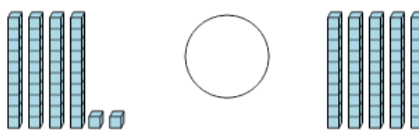
1 Which way would the alligator face to eat the largest set of blocks?



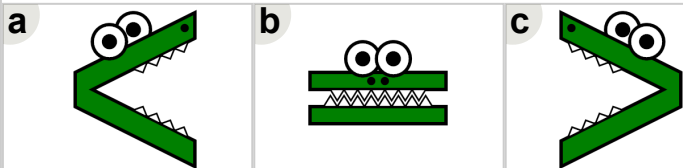

2 Which way would the alligator face to eat the largest set of blocks?



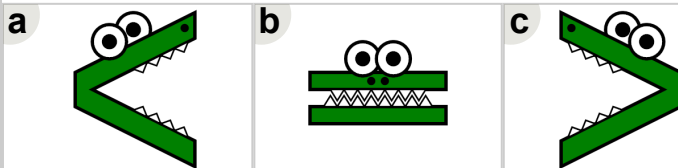

3 Which way would the alligator face to eat the largest set of blocks?



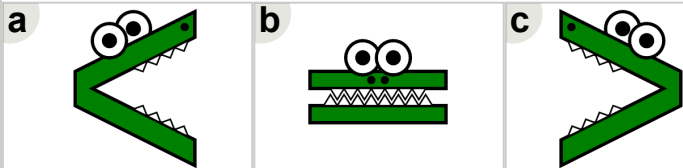
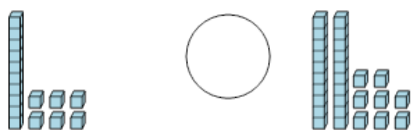
4 Which way would the alligator face to eat the largest set of blocks?



5 Which way would the alligator face to eat the largest set of blocks?



6 Which way would the alligator face to eat the largest set of blocks?



7 Which way would the alligator face to eat the largest set of blocks?

