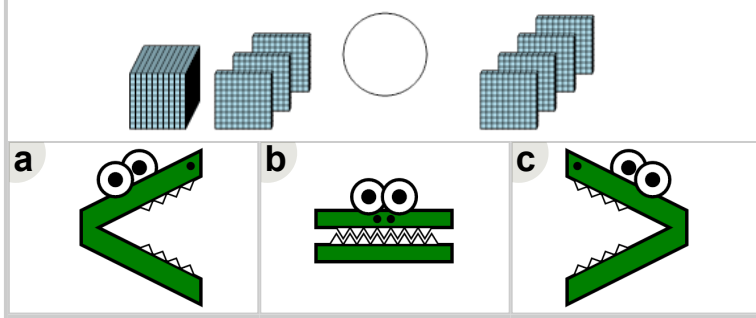




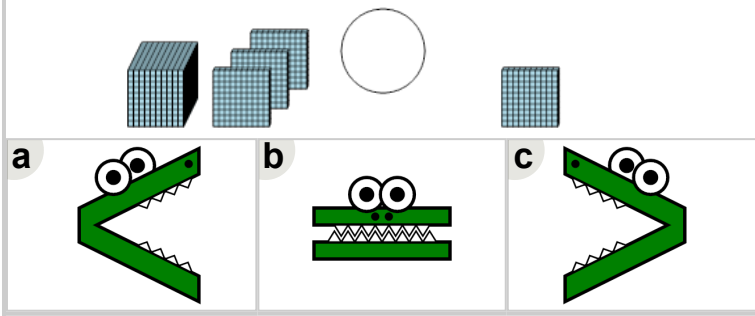
Math worksheet on 'Base 10 Blocks - Less or Greater Than - Pictures to Alligator - Thousands and Hundreds (Level 1)'. Part of a broader unit on 'Base Ten Blocks - Comparing Intro'

Learn online: app.mobius.academy/math/units/base_ten_blocks_compare_intro/

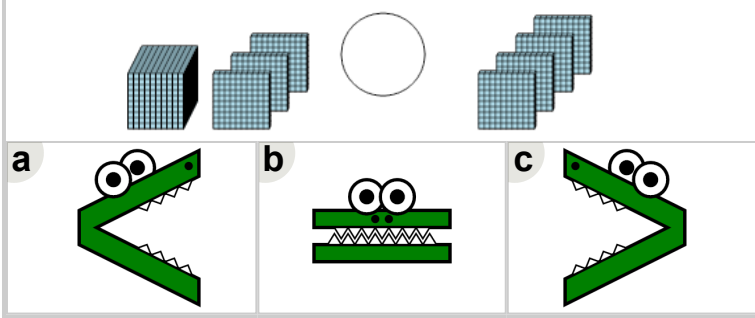
2 Which way would the alligator face to eat the largest set of blocks?



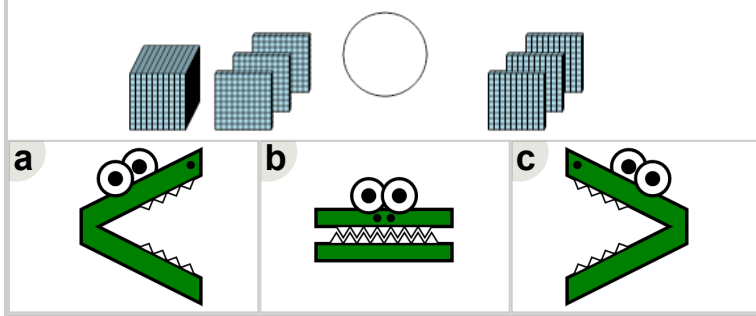
1 Which way would the alligator face to eat the largest set of blocks?



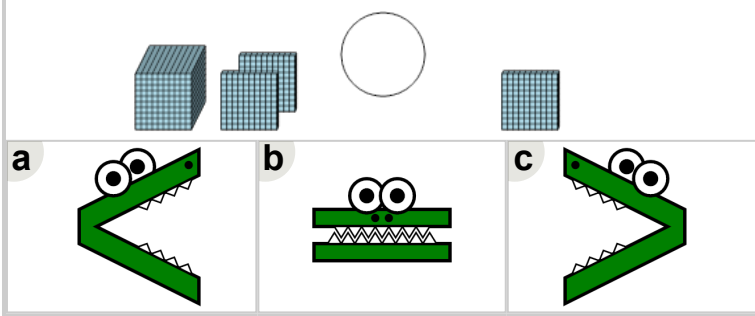
3 Which way would the alligator face to eat the largest set of blocks?



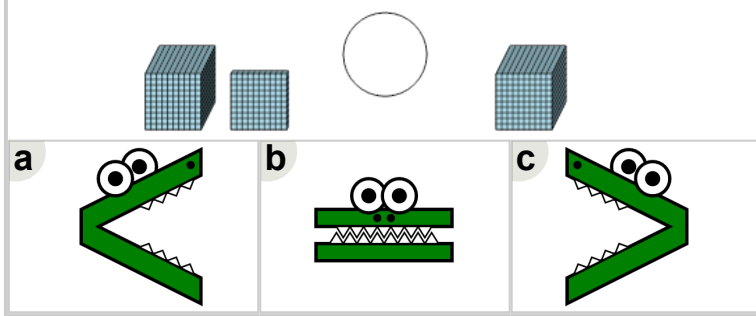
4 Which way would the alligator face to eat the largest set of blocks?



5 Which way would the alligator face to eat the largest set of blocks?



6 Which way would the alligator face to eat the largest set of blocks?



7 Which way would the alligator face to eat the largest set of blocks?

