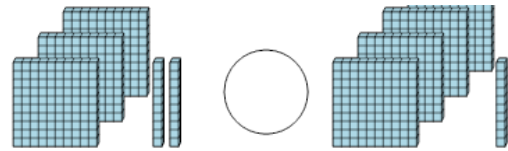




Math worksheet on 'Base 10 Blocks - Less or Greater Than - Pictures to Symbol - Hundreds and Tens (Level 2)'. Part of a broader unit on 'Base Ten Blocks - Comparing Intro'


Learn online: app.mobius.academy/math/units/base_ten_blocks_compare_intro/

1 Is the first set less than, greater than, or equal to the second set?



a < b = c >

2 Is the first set less than, greater than, or equal to the second set?



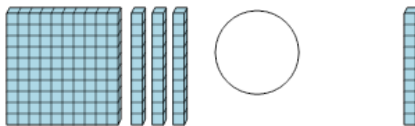
a < b = c >

3 Is the first set less than, greater than, or equal to the second set?



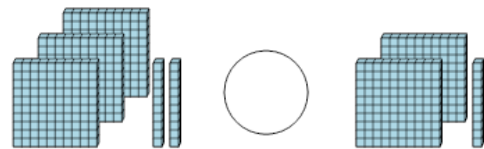
a < b = c >

4 Is the first set less than, greater than, or equal to the second set?




a < b = c >

5 Is the first set less than, greater than, or equal to the second set?




a < b = c >

6 Is the first set less than, greater than, or equal to the second set?



a < b = c >

7 Is the first set less than, greater than, or equal to the second set?



a < b = c >