




Math worksheet on 'Base 10 Blocks - Less or Greater Than - Pictures to Symbol - Ones (Level 1)'.
Part of a broader unit on 'Base Ten Blocks - Comparing Intro'

Learn online: app.mobius.academy/math/units/base_ten_blocks_compare_intro/

1 Is the first set less than, greater than, or equal to the second set?



a

<


b

=

c

>

2 Is the first set less than, greater than, or equal to the second set?



a

<


b

=

c

>

3 Is the first set less than, greater than, or equal to the second set?



a

<


b

=

c

>

4 Is the first set less than, greater than, or equal to the second set?



a

<


b

=

c

>

5 Is the first set less than, greater than, or equal to the second set?



a

<


b

=

c

>

6 Is the first set less than, greater than, or equal to the second set?



a

<

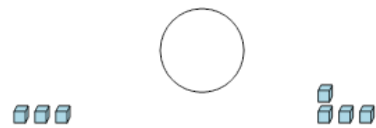
b

=

c

>

7 Is the first set less than, greater than, or equal to the second set?



a

<

b

=

c

>