




Math worksheet on 'Base 10 Blocks - Less or Greater Than - Pictures to Symbol - Ones (Level 2)'.
Part of a broader unit on 'Ten Groups - Less Than, Greater Than'

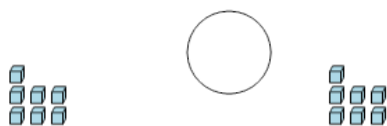
Learn online: app.mobius.academy/math/units/ten_groups_compare_intro/

1 Is the first set less than, greater than, or equal to the second set?



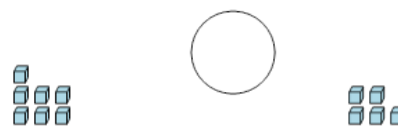
a < **b** = **c** >

2 Is the first set less than, greater than, or equal to the second set?



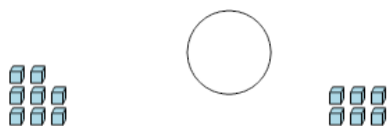
a < **b** = **c** >

3 Is the first set less than, greater than, or equal to the second set?



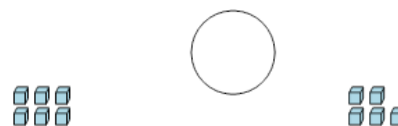
a < **b** = **c** >

4 Is the first set less than, greater than, or equal to the second set?



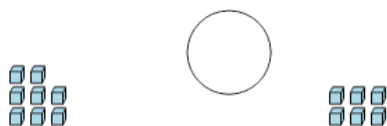
a < **b** = **c** >

5 Is the first set less than, greater than, or equal to the second set?



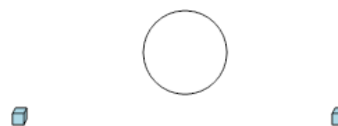
a < **b** = **c** >

6 Is the first set less than, greater than, or equal to the second set?



a < **b** = **c** >

7 Is the first set less than, greater than, or equal to the second set?



a < **b** = **c** >