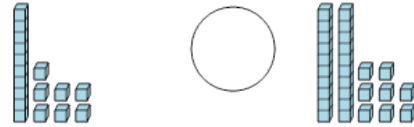




Math worksheet on 'Base 10 Blocks - Less or Greater Than - Pictures to Symbol - Tens and Ones (Level 2)'. Part of a broader unit on 'Ten Groups - Less Than, Greater Than'

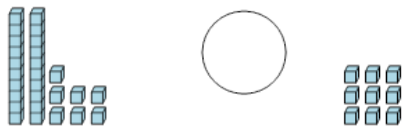
Learn online: app.mobius.academy/math/units/ten_groups_compare_intro/

1 Is the first set less than, greater than, or equal to the second set?



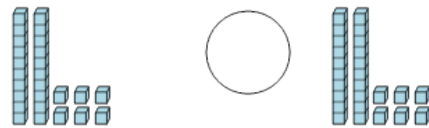
a	b	c
$<$	$=$	$>$

2 Is the first set less than, greater than, or equal to the second set?



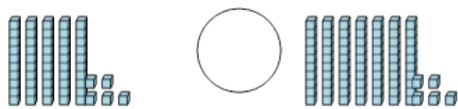
a	b	c
$<$	$=$	$>$

3 Is the first set less than, greater than, or equal to the second set?



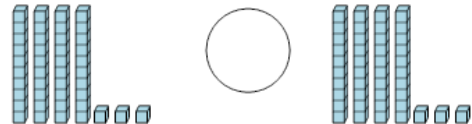
a	b	c
$<$	$=$	$>$

4 Is the first set less than, greater than, or equal to the second set?



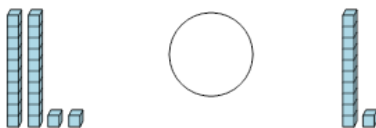
a	b	c
$<$	$=$	$>$

5 Is the first set less than, greater than, or equal to the second set?



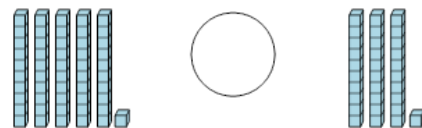
a	b	c
$<$	$=$	$>$

6 Is the first set less than, greater than, or equal to the second set?



a	b	c
$<$	$=$	$>$

7 Is the first set less than, greater than, or equal to the second set?



a	b	c
$<$	$=$	$>$