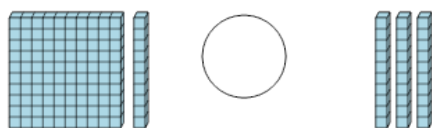




Math worksheet on 'Base 10 Blocks - Less or Greater Than - Pictures to Words - Hundreds and Tens (Level 1)'. Part of a broader unit on 'Base Ten Blocks - Comparing Intro'

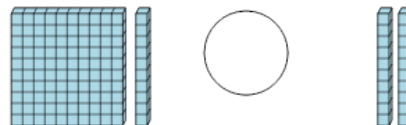
Learn online: [app.mobius.academy/math/units/base\\_ten\\_blocks\\_compare\\_intro/](http://app.mobius.academy/math/units/base_ten_blocks_compare_intro/)

**2** Is the first set less than, greater than, or equal to the second set?



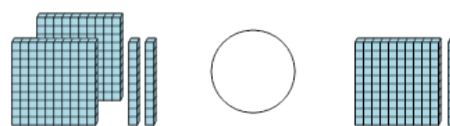
- |          |         |          |        |
|----------|---------|----------|--------|
| <b>a</b> | less    | <b>b</b> | equals |
| <b>c</b> | greater |          |        |

**1** Is the first set less than, greater than, or equal to the second set?



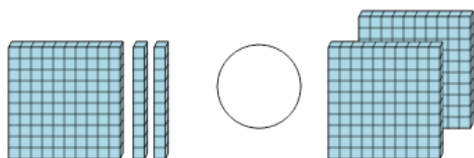
- |          |         |          |        |
|----------|---------|----------|--------|
| <b>a</b> | less    | <b>b</b> | equals |
| <b>c</b> | greater |          |        |

**3** Is the first set less than, greater than, or equal to the second set?



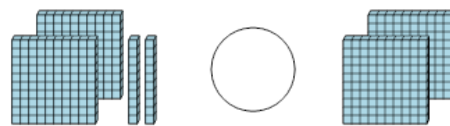
- |          |         |          |        |
|----------|---------|----------|--------|
| <b>a</b> | less    | <b>b</b> | equals |
| <b>c</b> | greater |          |        |

**4** Is the first set less than, greater than, or equal to the second set?



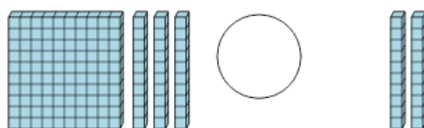
- |          |         |          |        |
|----------|---------|----------|--------|
| <b>a</b> | less    | <b>b</b> | equals |
| <b>c</b> | greater |          |        |

**5** Is the first set less than, greater than, or equal to the second set?



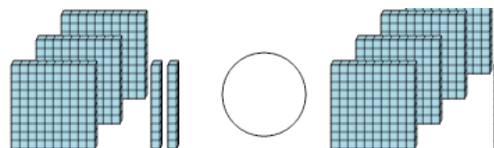
- |          |         |          |        |
|----------|---------|----------|--------|
| <b>a</b> | less    | <b>b</b> | equals |
| <b>c</b> | greater |          |        |

**6** Is the first set less than, greater than, or equal to the second set?



- |          |         |          |        |
|----------|---------|----------|--------|
| <b>a</b> | less    | <b>b</b> | equals |
| <b>c</b> | greater |          |        |

**7** Is the first set less than, greater than, or equal to the second set?



- |          |         |          |        |
|----------|---------|----------|--------|
| <b>a</b> | less    | <b>b</b> | equals |
| <b>c</b> | greater |          |        |