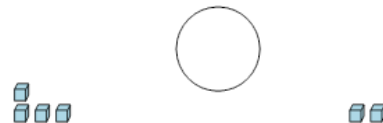




Math worksheet on 'Base 10 Blocks - Less or Greater Than - Pictures to Words - Ones (Level 1)'.  
Part of a broader unit on 'Base Ten Blocks - Comparing Intro'

Learn online: [app.mobius.academy/math/units/base\\_ten\\_blocks\\_compare\\_intro/](http://app.mobius.academy/math/units/base_ten_blocks_compare_intro/)

**1** Is the first set less than, greater than, or equal to the second set?

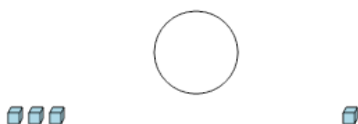


**a** less

**b** equals

**c** greater

**2** Is the first set less than, greater than, or equal to the second set?




**a** less

**b** equals

**c** greater

**3** Is the first set less than, greater than, or equal to the second set?




**a** less

**b** equals

**c** greater

**4** Is the first set less than, greater than, or equal to the second set?

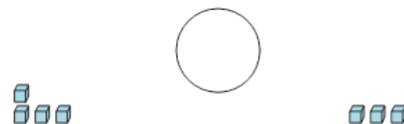


**a** less

**b** equals

**c** greater

**5** Is the first set less than, greater than, or equal to the second set?

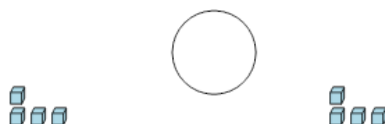


**a** less

**b** equals

**c** greater

**6** Is the first set less than, greater than, or equal to the second set?

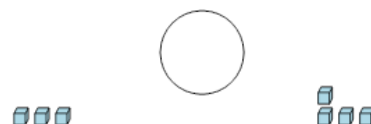


**a** less

**b** equals

**c** greater

**7** Is the first set less than, greater than, or equal to the second set?



**a** less

**b** equals

**c** greater