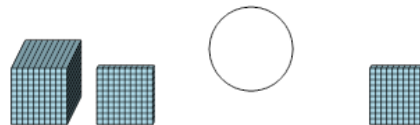




Math worksheet on 'Base 10 Blocks - Less or Greater Than - Pictures to Words - Thousands and Hundreds (Level 1)'. Part of a broader unit on 'Base Ten Blocks - Comparing Intro'

Learn online: app.mobius.academy/math/units/base_ten_blocks_compare_intro/

1 Is the first set less than, greater than, or equal to the second set?

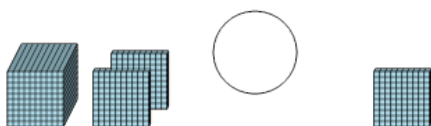


a less

b equals

c greater

2 Is the first set less than, greater than, or equal to the second set?



a less

b equals

c greater

3 Is the first set less than, greater than, or equal to the second set?




a less

b equals

c greater

4 Is the first set less than, greater than, or equal to the second set?

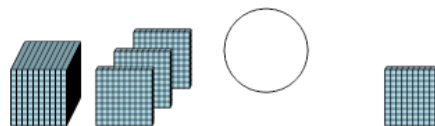


a less

b equals

c greater

5 Is the first set less than, greater than, or equal to the second set?

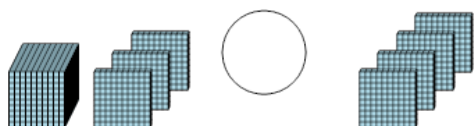


a less

b equals

c greater

6 Is the first set less than, greater than, or equal to the second set?

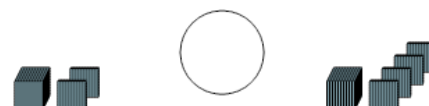


a less

b equals

c greater

7 Is the first set less than, greater than, or equal to the second set?



a less

b equals

c greater