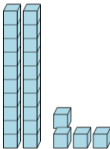
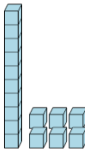




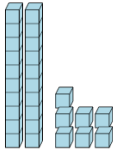
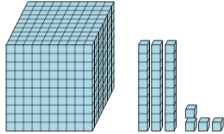
Math worksheet on 'Base 10 Blocks - Counting - Number to Picture, Tens and Ones (Level 2)'. Part of a broader unit on 'Ten Groups - Counting'

Learn online: [app.mobius.academy/math/units/ten\\_groups\\_counting\\_intro/](http://app.mobius.academy/math/units/ten_groups_counting_intro/)

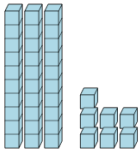
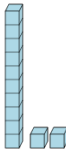
**2** Which picture shows this many blocks? **16**

<p><b>a</b></p> 	<p><b>b</b></p> 
---	---

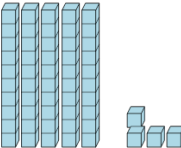
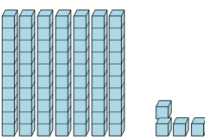
**1** Which picture shows this many blocks? **27**

<p><b>a</b></p> 	<p><b>b</b></p> 
--	---

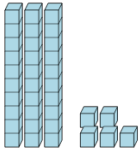
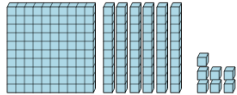
**3** Which picture shows this many blocks? **37**

<p><b>a</b></p> 	<p><b>b</b></p> 
--	---


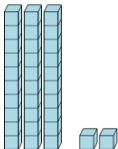
**4** Which picture shows this many blocks? **54**

<p><b>a</b></p> 	<p><b>b</b></p> 
---	---

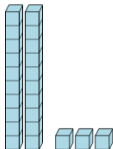
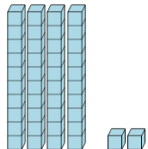
**5** Which picture shows this many blocks? **35**

<p><b>a</b></p> 	<p><b>b</b></p> 
--	---

**6** Which picture shows this many blocks? **32**

<p><b>a</b></p> 	<p><b>b</b></p> 
---	---

**7** Which picture shows this many blocks? **23**

<p><b>a</b></p> 	<p><b>b</b></p> 
--	---