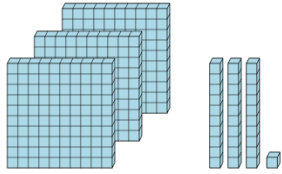




Math worksheet on 'Base 10 Blocks - Counting - Picture to Number - Hundreds, Tens, and Ones (Level 1)'. Part of a broader unit on 'Number Sense - Practice'

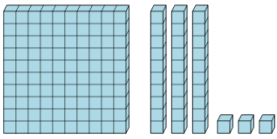
Learn online: [app.mobius.academy/math/units/number\\_sense\\_practice/](http://app.mobius.academy/math/units/number_sense_practice/)

**1** Find the total number of blocks



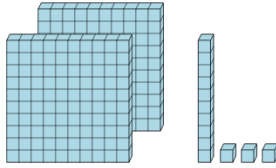
<b>a</b>	<b>b</b>	<b>c</b>
122	703	2771
<b>d</b>	<b>e</b>	<b>f</b>
331	514	124

**2** Find the total number of blocks



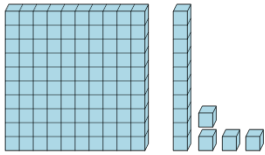
<b>a</b>	<b>b</b>	<b>c</b>
411	5432	353
<b>d</b>	<b>e</b>	<b>f</b>
350	133	201

**3** Find the total number of blocks



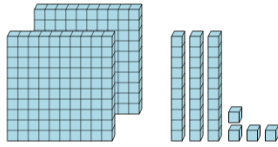
<b>a</b>	<b>b</b>	<b>c</b>
1125	16	226
<b>d</b>	<b>e</b>	<b>f</b>
237	213	651

**4** Find the total number of blocks



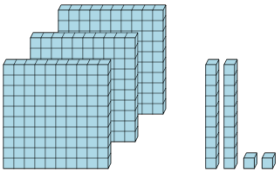
<b>a</b>	<b>b</b>	<b>c</b>
318	333	127
<b>d</b>	<b>e</b>	<b>f</b>
135	1523	114

**5** Find the total number of blocks



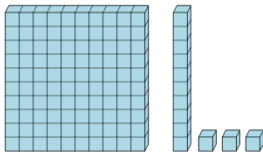
<b>a</b>	<b>b</b>	<b>c</b>
234	124	4040
<b>d</b>	<b>e</b>	<b>f</b>
225	356	545

**6** Find the total number of blocks



<b>a</b>	<b>b</b>	<b>c</b>
712	212	735
<b>d</b>	<b>e</b>	<b>f</b>
1502	322	722

**7** Find the total number of blocks



<b>a</b>	<b>b</b>	<b>c</b>
2221	144	134
<b>d</b>	<b>e</b>	<b>f</b>
104	113	541