

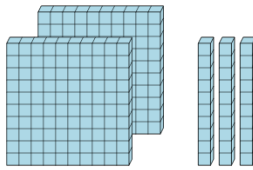


Math worksheet on 'Base 10 Blocks - Counting - Picture to Number - Hundreds and Tens (Level 1)'.
Part of a broader unit on 'Ten Groups - Counting'

Learn online: app.mobius.academy/math/units/ten_groups_counting_intro/

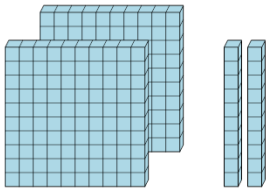
1 Find the total number of blocks

a	b	c
500	43	230
d	e	f
1500	140	260



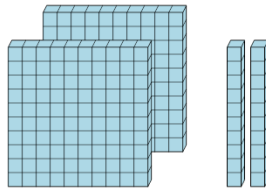
2 Find the total number of blocks

a	b	c
220	350	3410
d	e	f
240	2350	210



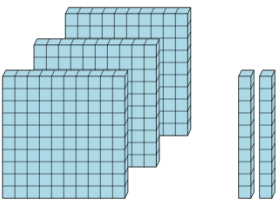
3 Find the total number of blocks

a	b	c
230	140	340
d	e	f
220	120	10



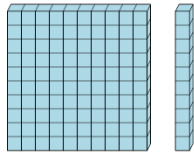
4 Find the total number of blocks

a	b	c
2320	300	564
d	e	f
100	320	520



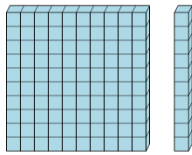
5 Find the total number of blocks

a	b	c
10	310	440
d	e	f
110	20	120



6 Find the total number of blocks

a	b	c
140	20	320
d	e	f
340	110	10



7 Find the total number of blocks

a	b	c
2301	4215	600
d	e	f
440	310	320

