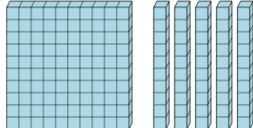




Math worksheet on 'Base 10 Blocks - Counting - Picture to Number - Hundreds and Tens (Level 2)'. Part of a broader unit on 'Number Sense - Practice'

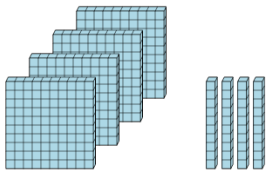
Learn online: [app.mobius.academy/math/units/number\\_sense\\_practice/](http://app.mobius.academy/math/units/number_sense_practice/)

**1** Find the total number of blocks



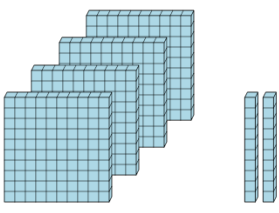
<b>a</b>	<b>b</b>	<b>c</b>
150	350	460
<b>d</b>	<b>e</b>	<b>f</b>
210	450	3030

**2** Find the total number of blocks



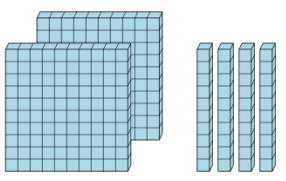
<b>a</b>	<b>b</b>	<b>c</b>
720	440	740
<b>d</b>	<b>e</b>	<b>f</b>
544	620	760

**3** Find the total number of blocks



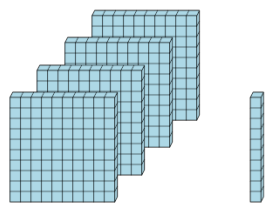
<b>a</b>	<b>b</b>	<b>c</b>
1830	710	500
<b>d</b>	<b>e</b>	<b>f</b>
420	620	5500

**4** Find the total number of blocks



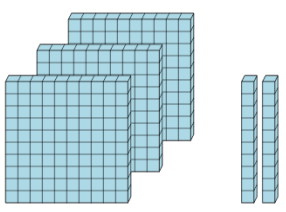
<b>a</b>	<b>b</b>	<b>c</b>
4160	2150	100
<b>d</b>	<b>e</b>	<b>f</b>
340	240	1140

**5** Find the total number of blocks



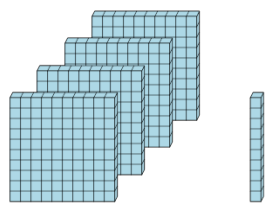
<b>a</b>	<b>b</b>	<b>c</b>
1640	710	150
<b>d</b>	<b>e</b>	<b>f</b>
120	410	804

**6** Find the total number of blocks



<b>a</b>	<b>b</b>	<b>c</b>
730	320	210
<b>d</b>	<b>e</b>	<b>f</b>
5400	110	740

**7** Find the total number of blocks



<b>a</b>	<b>b</b>	<b>c</b>
453	110	4340
<b>d</b>	<b>e</b>	<b>f</b>
320	410	133