

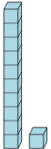


Math worksheet on 'Base 10 Blocks - Counting - Picture to Number - Tens and Ones (Level 1)'. Part of a broader unit on 'Number Sense - Basics'

Learn online: app.mobius.academy/math/units/number_sense_basics/

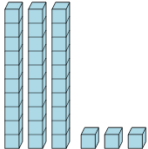
1 Find the total number of blocks

a	b	c
10	312	5051
d	e	f
11	14	4003



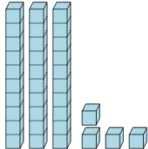
2 Find the total number of blocks

a	b	c
22	26	2021
d	e	f
32	71	33



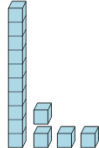
3 Find the total number of blocks

a	b	c
5472	16	35
d	e	f
34	22	518



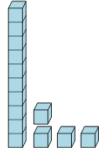
4 Find the total number of blocks

a	b	c
336	2	14
d	e	f
23	38	13



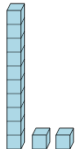
5 Find the total number of blocks

a	b	c
11	2023	41
d	e	f
3051	31	14



6 Find the total number of blocks

a	b	c
12	46	23
d	e	f
1012	20	5232



7 Find the total number of blocks

a	b	c
12	35	64
d	e	f
2040	320	22

