

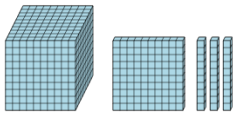


Math worksheet on 'Base 10 Blocks - Counting - Picture to Number - Thousands, Hundreds and Tens (Level 2)'. Part of a broader unit on 'Base Ten Blocks - Counting Practice'

Learn online: app.mobius.academy/math/units/base_ten_blocks_counting_practice/

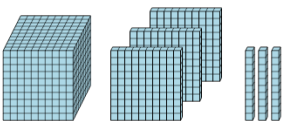
1 Find the total number of blocks

a	b	c
1220	2350	2520
d	e	f
1160	3142	1130



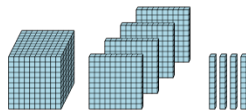
2 Find the total number of blocks

a	b	c
1273	4500	2210
d	e	f
1330	4520	2220



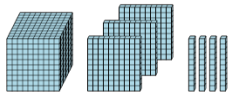
3 Find the total number of blocks

a	b	c
1440	2130	4710
d	e	f
5210	5584	1530



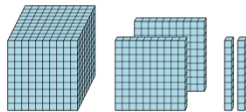
4 Find the total number of blocks

a	b	c
4605	4000	3120
d	e	f
140	4575	1340



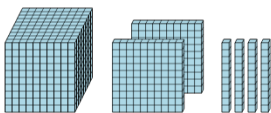
5 Find the total number of blocks

a	b	c
1220	2230	3140
d	e	f
4630	1100	1310



6 Find the total number of blocks

a	b	c
4250	1450	1240
d	e	f
3550	1350	1300



7 Find the total number of blocks

a	b	c
2530	80	1430
d	e	f
860	1450	4780

