

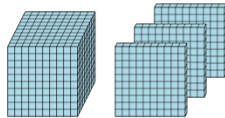


Math worksheet on 'Base 10 Blocks - Counting - Picture to Number - Thousands and Hundreds (Level 1)'. Part of a broader unit on 'Base Ten Blocks - Counting Practice'

Learn online: app.mobius.academy/math/units/base_ten_blocks_counting_practice/

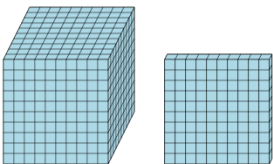
1 Find the total number of blocks

a	b	c
5200	2000	1440
d	e	f
2320	1300	4100



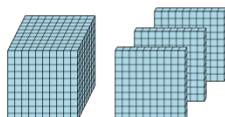
2 Find the total number of blocks

a	b	c
552	1400	1310
d	e	f
2450	1100	2500



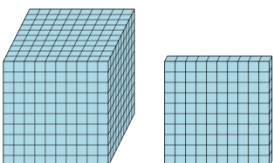
3 Find the total number of blocks

a	b	c
1300	1504	4200
d	e	f
1700	2500	4100



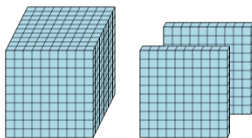
4 Find the total number of blocks

a	b	c
1300	5203	1521
d	e	f
300	1100	2340



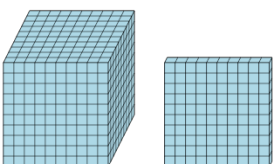
5 Find the total number of blocks

a	b	c
3500	3000	5100
d	e	f
1200	2200	2100



6 Find the total number of blocks

a	b	c
400	1100	1400
d	e	f
3000	2100	1300



7 Find the total number of blocks

a	b	c
1100	3200	3400
d	e	f
2100	2004	5200

