

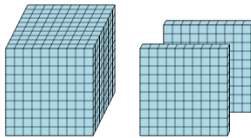


Math worksheet on 'Base 10 Blocks - Counting - Picture to Number - Thousands and Hundreds (Level 2)'. Part of a broader unit on 'Base Ten Blocks - Counting Practice'

Learn online: app.mobius.academy/math/units/base_ten_blocks_counting_practice/

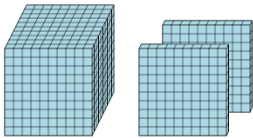
1 Find the total number of blocks

a	b	c
1300	1400	1000
d	e	f
4400	1200	1110



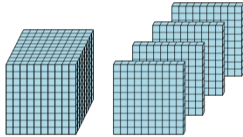
2 Find the total number of blocks

a	b	c
3500	3300	1200
d	e	f
3410	1103	5300



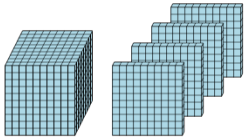
3 Find the total number of blocks

a	b	c
1700	2704	4705
d	e	f
2400	2100	1400



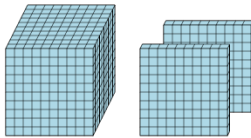
4 Find the total number of blocks

a	b	c
1700	3400	5600
d	e	f
1000	3420	1400



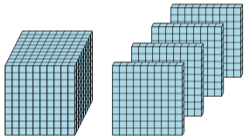
5 Find the total number of blocks

a	b	c
3600	2200	4203
d	e	f
1200	3300	2401



6 Find the total number of blocks

a	b	c
5000	5800	3640
d	e	f
530	1400	4301



7 Find the total number of blocks

a	b	c
1100	2100	2004
d	e	f
3200	3400	5200

