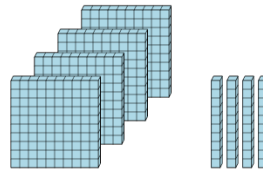




Math worksheet on 'Base 10 Blocks - Counting - Picture to Places - Hundreds and Tens (Level 2)'. Part of a broader unit on 'Ten Groups - Counting'

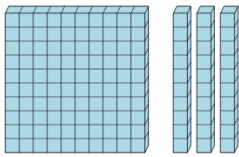
Learn online: [app.mobius.academy/math/units/ten\\_groups\\_counting\\_intro/](http://app.mobius.academy/math/units/ten_groups_counting_intro/)

**1** Count the different base ten blocks



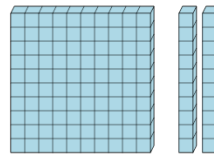
- a** 6 hundreds, and 3 tens
- b** 8 hundreds, and 1 ten
- c** 8 hundreds
- d** 7 tens
- e** 3 hundreds, and 5 tens
- f** 4 hundreds, and 4 tens

**2** Count the different base ten blocks



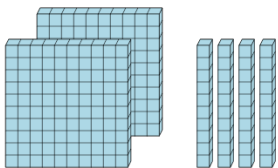
- a** 5 hundreds, and 4 tens
- b** 1 thousand, 1 hundred, and 3 tens
- c** 4 hundreds, and 2 tens
- d** 2 hundreds, and 6 tens
- e** 1 hundred, and 3 tens
- f** 2 hundreds, and 5 tens

**3** Count the different base ten blocks



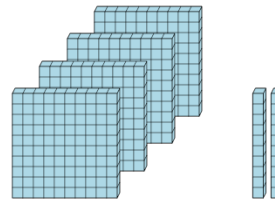
- a** 3 hundreds, and 4 tens
- b** 3 hundreds, 3 tens, and 3 ones
- c** 1 hundred, and 4 tens
- d** 1 hundred, and 2 tens
- e** 2 hundreds, 1 ten, and 3 ones
- f** 4 thousands, 1 hundred, and 2 tens

**4** Count the different base ten blocks



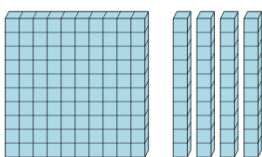
- a** 1 hundred, and 8 tens
- b** 3 hundreds, and 1 ten
- c** 3 hundreds, and 2 tens
- d** 4 tens
- e** 2 hundreds, and 4 tens
- f** 3 hundreds, and 6 tens

**5** Count the different base ten blocks



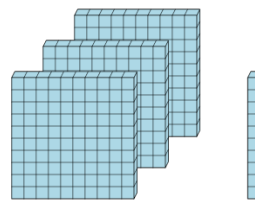
- a** 1 ten
- b** 6 hundreds, and 2 tens
- c** 4 hundreds, and 2 tens
- d** 1 hundred, and 4 tens
- e** 5 thousands, 3 hundreds, and 4 tens
- f** 3 hundreds, and 3 tens

**6** Count the different base ten blocks



- a** 2 thousands, 5 hundreds, and 5 ones
- b** 1 hundred, and 4 tens
- c** 3 hundreds
- d** 3 hundreds, and 4 tens
- e** 4 thousands, 1 hundred, and 8 tens
- f** 2 hundreds, and 2 tens

**7** Count the different base ten blocks



- a** 2 hundreds, and 5 tens
- b** 6 hundreds, and 1 ten
- c** 2 hundreds
- d** 3 hundreds, and 1 ten
- e** 1 hundred, and 3 tens
- f** 2 hundreds, and 1 ten