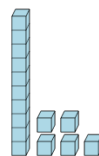




Math worksheet on 'Base 10 Blocks - Counting - Picture to Places - Tens and Ones (Level 2)'. Part of a broader unit on 'Ten Groups - Counting'

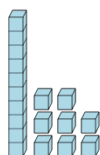
Learn online: app.mobius.academy/math/units/ten_groups_counting_intro/

1 Count the different base ten blocks



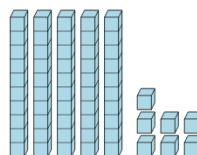
- a** 1 ten, and 5 ones
- b** 1 thousand, 3 hundreds, 4 tens, and 8 ones
- c** 5 thousands, 2 tens, and 4 ones
- d** 2 tens, and 8 ones
- e** 2 thousands, 1 hundred, 5 tens, and 7 ones
- f** 2 tens, and 5 ones

2 Count the different base ten blocks



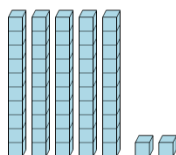
- a** 5 tens, and 7 ones
- b** 3 hundreds, 3 tens, and 8 ones
- c** 1 ten, and 8 ones
- d** 4 hundreds, 5 tens, and 10 ones
- e** 5 ones
- f** 5 tens, and 6 ones

3 Count the different base ten blocks



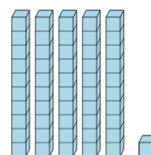
- a** 4 tens, and 11 ones
- b** 3 thousands, 2 hundreds, 8 tens, and 4 ones
- c** 2 tens, and 7 ones
- d** 3 tens, and 3 ones
- e** 5 tens, and 7 ones
- f** 7 tens, and 10 ones

4 Count the different base ten blocks



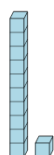
- a** 4 tens, and 5 ones
- b** 5 tens, and 2 ones
- c** 5 thousands, and 7 tens
- d** 2 thousands, and 8 tens
- e** 1 ten, and 3 ones
- f** 2 tens, and 3 ones

5 Count the different base ten blocks



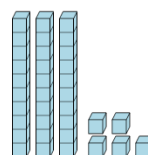
- a** 8 tens, and 2 ones
- b** 4 hundreds, and 5 tens
- c** 9 tens
- d** 4 hundreds, 7 tens, and 5 ones
- e** 5 tens, and 1 one
- f** 2 tens, and 4 ones

6 Count the different base ten blocks



- a** 3 tens, and 3 ones
- b** 1 ten, and 5 ones
- c** 3 thousands, 3 hundreds, 3 tens, and 1 one
- d** 3 hundreds, 1 ten, and 3 ones
- e** 1 ten, and 1 one
- f** 4 hundreds, 1 ten, and 3 ones

7 Count the different base ten blocks



- a** 6 tens
- b** 4 hundreds, and 1 one
- c** 3 tens, and 5 ones
- d** 2 tens, and 5 ones
- e** 3 hundreds, 4 tens, and 8 ones
- f** 2 tens, and 7 ones