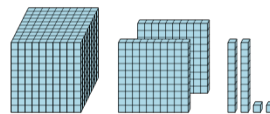




Math worksheet on 'Base 10 Blocks - Counting - Picture to Places - Thousands, Hundreds, Tens, and Ones (Level 1)'. Part of a broader unit on 'Base Ten Blocks - Counting Practice'

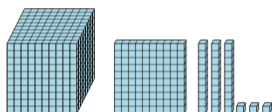
Learn online: app.mobius.academy/math/units/base_ten_blocks_counting_practice/

1 Count the different base ten blocks



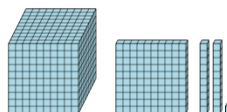
- a** 5 thousands, 5 hundreds, 6 tens, and 2 ones
- b** 2 thousands, 4 hundreds, 1 ten, and 2 ones
- c** 4 thousands, 3 hundreds, 6 tens, and 2 ones
- d** 4 thousands, 1 hundred, and 3 ones
- e** 3 thousands, 3 hundreds, 4 tens, and 5 ones
- f** 1 thousand, 2 hundreds, 2 tens, and 2 ones

2 Count the different base ten blocks




- a** 1 thousand, 2 hundreds, 2 tens, and 2 ones
- b** 3 thousands, 5 hundreds, 1 ten, and 3 ones
- c** 5 thousands, 3 hundreds, 7 tens, and 2 ones
- d** 3 thousands, 2 hundreds, 2 tens, and 2 ones
- e** 1 thousand, 1 hundred, 3 tens, and 3 ones
- f** 2 thousands, 1 hundred, 7 tens, and 2 ones

3 Count the different base ten blocks



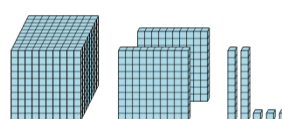
- a** 3 thousands, 3 hundreds, and 1 one
- b** 3 thousands, 4 hundreds, and 2 tens
- c** 3 thousands, 3 hundreds, and 4 ones
- d** 1 thousand, 1 hundred, 2 tens, and 1 one
- e** 4 hundreds, 2 tens, and 1 one
- f** 4 thousands, 3 hundreds, 3 tens, and 3 ones

4 Count the different base ten blocks



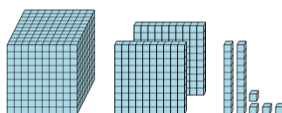
- a** 4 thousands, 2 hundreds, 2 tens, and 2 ones
- b** 1 thousand, 3 hundreds, 2 tens, and 1 one
- c** 1 thousand, 2 hundreds, 5 tens, and 2 ones
- d** 3 thousands, 4 hundreds, 3 tens, and 2 ones
- e** 1 thousand, 1 hundred, 2 tens, and 4 ones
- f** 3 thousands, 1 ten, and 4 ones

5 Count the different base ten blocks



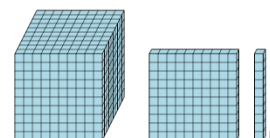
- a** 1 thousand, 2 hundreds, 2 tens, and 3 ones
- b** 4 thousands, 1 hundred, 4 tens, and 2 ones
- c** 4 thousands, 3 hundreds, 5 tens, and 2 ones
- d** 1 thousand, 1 hundred, 6 tens, and 2 ones
- e** 2 thousands, 1 hundred, 3 tens, and 2 ones
- f** 5 thousands, 3 hundreds, 1 ten, and 4 ones

6 Count the different base ten blocks



- a** 4 thousands, 3 hundreds, 5 tens, and 5 ones
- b** 2 thousands, 1 hundred, 2 tens, and 1 one
- c** 3 thousands, 2 hundreds, 6 tens, and 7 ones
- d** 2 thousands, 3 tens, and 4 ones
- e** 1 thousand, 1 hundred, 2 tens, and 2 ones
- f** 1 thousand, 2 hundreds, 2 tens, and 4 ones

7 Count the different base ten blocks



- a** 4 thousands, 2 hundreds, 4 tens, and 5 ones
- b** 5 thousands, 3 hundreds, and 3 ones
- c** 3 thousands, 5 hundreds, 1 ten, and 4 ones
- d** 1 thousand, 1 hundred, 1 ten, and 1 one
- e** 1 thousand, 3 hundreds, and 5 ones
- f** 5 thousands, 2 tens, and 1 one