



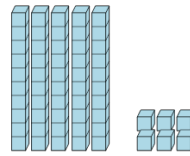
Math worksheet on 'Base 10 Blocks - Counting - Places to Picture - Tens and Ones (Level 2)'. Part of a broader unit on 'Ten Groups - Counting'

Learn online: app.mobius.academy/math/units/ten_groups_counting_intro/

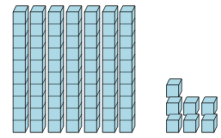
1 Which picture shows this many base ten blocks?

5 tens, and 6 ones

a



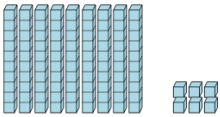
b



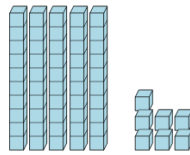
2 Which picture shows this many base ten blocks?

5 tens, and 7 ones

a



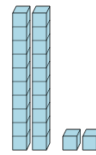
b



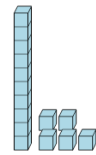
3 Which picture shows this many base ten blocks?

2 tens, and 2 ones

a



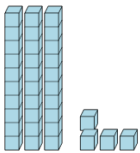
b



4 Which picture shows this many base ten blocks?

3 tens, and 4 ones

a



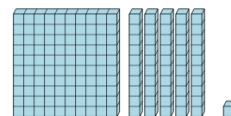
b



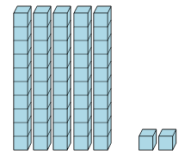
5 Which picture shows this many base ten blocks?

5 tens, and 2 ones

a



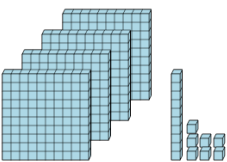
b



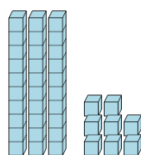
6 Which picture shows this many base ten blocks?

3 tens, and 8 ones

a



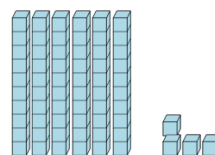
b



7 Which picture shows this many base ten blocks?

5 tens, and 1 one

a



b

