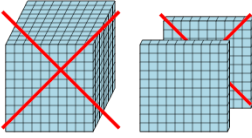




Math worksheet on 'Base 10 Blocks - Subtracting - Picture (Cross-out) to Equation, No Borrow - Thousands and Hundreds (Level 1)'. Part of a broader unit on 'Ten Groups - Subtracting'

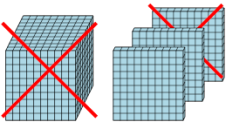
Learn online: app.mobius.academy/math/units/ten_groups_subtraction_intro/

1 Choose the subtraction sentence for the blocks?



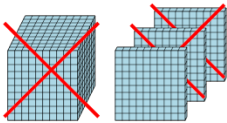
a 1200 - 2100	b 2100 - 1100
c 1200 - 1300	d 1200 - 2440
e 1200 - 1100	f 5500 - 1100

2 Choose the subtraction sentence for the blocks?



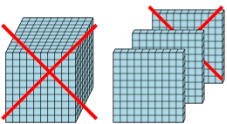
a 2000 - 1100	b 1300 - 3200
c 5400 - 1100	d 2100 - 1100
e 1300 - 3405	f 1300 - 1100

3 Choose the subtraction sentence for the blocks?



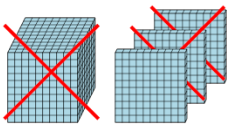
a 5100 - 1200	b 1300 - 3402
c 1300 - 3600	d 1300 - 5400
e 1300 - 1400	f 1300 - 1200

4 Choose the subtraction sentence for the blocks?



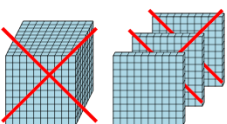
a 1300 - 1310	b 1300 - 3220
c 2040 - 1100	d 3100 - 1100
e 1300 - 1100	f 1300 - 2200

5 Choose the subtraction sentence for the blocks?



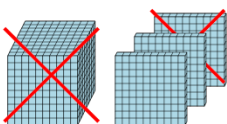
a 4200 - 1200	b 1300 - 4320
c 1300 - 2103	d 3000 - 1200
e 1300 - 1300	f 1300 - 1200

6 Choose the subtraction sentence for the blocks?



a 1000 - 1200	b 1300 - 1200
c 1300 - 3100	d 5200 - 1200
e 3130 - 1200	f 1700 - 1200

7 Choose the subtraction sentence for the blocks?



a 1300 - 1100	b 5300 - 1100
c 1300 - 1201	d 2400 - 1100
e 1200 - 1100	f 2300 - 1100