

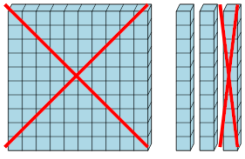


Math worksheet on 'Base 10 Blocks - Subtracting - Picture (Cross-out) to Answer, No Borrow - Hundreds and Tens (Level 1)'. Part of a broader unit on 'Addition and Subtraction of Integers - 1 and 2 Digit'

Learn online:

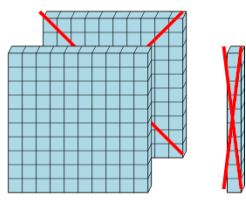
app.mobius.academy/math/units/addition_and_subtraction_integers_1_and_2_digit/

1 How many blocks are left?



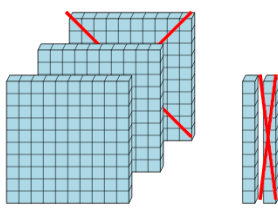
a	b	c
1570	390	200
d	e	f
858	210	20

2 How many blocks are left?



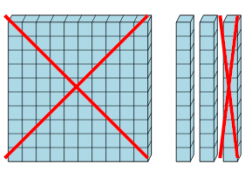
a	b	c
208	100	160
d	e	f
220	200	1900

3 How many blocks are left?



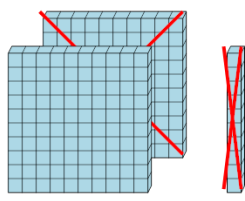
a	b	c
211	1124	210
d	e	f
5120	10	2699

4 How many blocks are left?



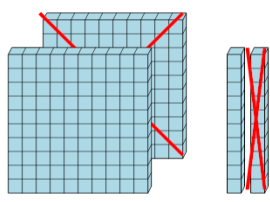
a	b	c
149	313	220
d	e	f
110	20	160

5 How many blocks are left?



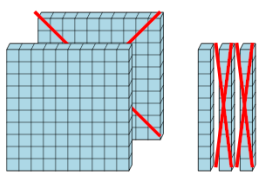
a	b	c
0	306	100
d	e	f
960	433	1726

6 How many blocks are left?



a	b	c
287	630	110
d	e	f
261	380	520

7 How many blocks are left?



a	b	c
3813	80	110
d	e	f
25	410	1160