

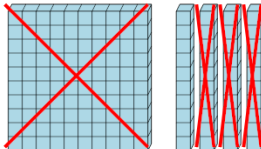


Math worksheet on 'Base 10 Blocks - Subtracting - Picture (Cross-out) to Answer, No Borrow - Hundreds and Tens (Level 2)'. Part of a broader unit on 'Addition and Subtraction of Integers - 1 and 2 Digit'

Learn online:

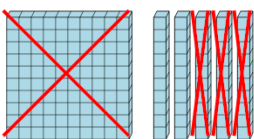
app.mobius.academy/math/units/addition_and_subtraction_integers_1_and_2_digit/

1 How many blocks are left?



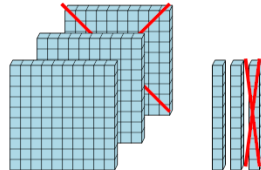
a	b	c
5210	3972	230
d	e	f
960	430	10

2 How many blocks are left?



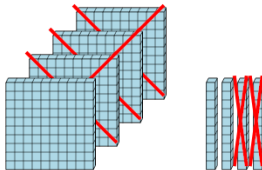
a	b	c
16	273	160
d	e	f
20	991	813

3 How many blocks are left?



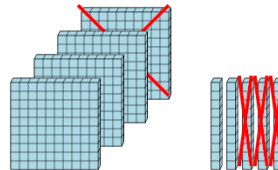
a	b	c
230	2000	450
d	e	f
220	3990	1120

4 How many blocks are left?



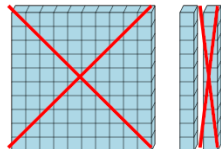
a	b	c
5030	120	5803
d	e	f
510	619	620

5 How many blocks are left?



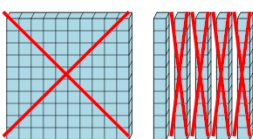
a	b	c
25	2280	60
d	e	f
320	380	283

6 How many blocks are left?



a	b	c
10	298	3830
d	e	f
690	310	1320

7 How many blocks are left?



a	b	c
10	4813	1020
d	e	f
3710	50	112