

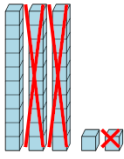


Math worksheet on 'Base 10 Blocks - Subtracting - Picture (Cross-out) to Answer, No Borrow - Tens and Ones (Level 1)'. Part of a broader unit on 'Addition and Subtraction of Integers - 1 and 2 Digit'

Learn online:

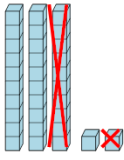
app.mobius.academy/math/units/addition_and_subtraction_integers_1_and_2_digit/

1 How many blocks are left?



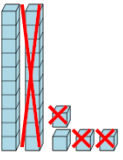
a	b	c
1023	14	11
d	e	f
19	1052	3961

2 How many blocks are left?



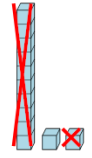
a	b	c
2025	21	42
d	e	f
2980	32	680

3 How many blocks are left?



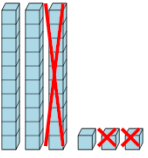
a	b	c
2683	11	2088
d	e	f
24	1276	5008

4 How many blocks are left?



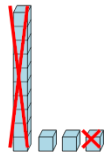
a	b	c
1983	1	10
d	e	f
2950	50	12

5 How many blocks are left?



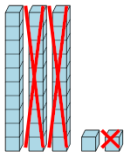
a	b	c
153	15	21
d	e	f
189	3869	26

6 How many blocks are left?



a	b	c
1031	2	18
d	e	f
15	2994	1

7 How many blocks are left?



a	b	c
25	11	2701
d	e	f
2002	290	3999