

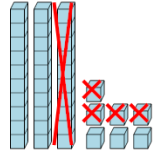


Math worksheet on 'Base 10 Blocks - Subtracting - Picture (Cross-out) to Answer, No Borrow - Tens and Ones (Level 2)'. Part of a broader unit on 'Addition and Subtraction of Integers - 1 and 2 Digit'

Learn online:

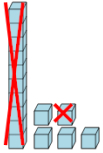
app.mobius.academy/math/units/addition_and_subtraction_integers_1_and_2_digit/

1 How many blocks are left?



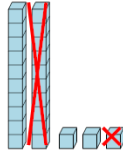
a	b	c
449	5016	23
d	e	f
60	11	3

2 How many blocks are left?



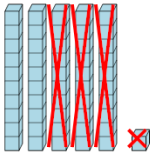
a	b	c
33	26	175
d	e	f
17	4	1707

3 How many blocks are left?



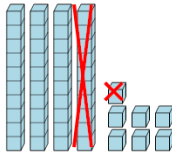
a	b	c
478	4019	4091
d	e	f
3693	12	1

4 How many blocks are left?



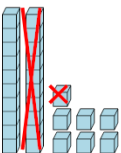
a	b	c
203	337	12
d	e	f
311	20	2

5 How many blocks are left?



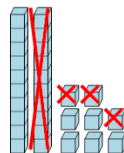
a	b	c
34	36	4333
d	e	f
4	1825	5029

6 How many blocks are left?



a	b	c
5	16	11
d	e	f
441	49	992

7 How many blocks are left?



a	b	c
14	292	33
d	e	f
1997	1996	15