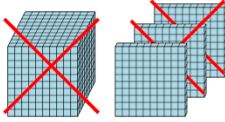




Math worksheet on 'Base 10 Blocks - Subtracting - Picture (Cross-out) to Answer, No Borrow - Thousands and Hundreds (Level 1)'. Part of a broader unit on 'Ten Groups - Subtracting'

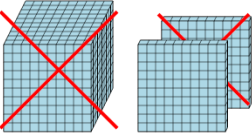
Learn online: app.mobius.academy/math/units/ten_groups_subtraction_intro/

1 How many blocks are left?



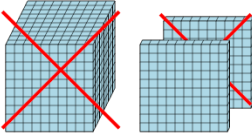
a	b	c
4491	620	800
d	e	f
200	100	3498

2 How many blocks are left?



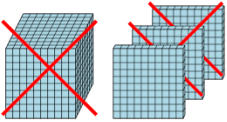
a	b	c
100	2	4140
d	e	f
3000	2866	0

3 How many blocks are left?



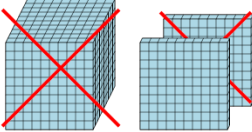
a	b	c
2200	100	1971
d	e	f
2900	520	200

4 How many blocks are left?



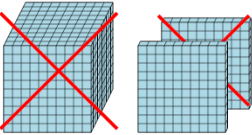
a	b	c
1100	3200	100
d	e	f
3380	2500	2790

5 How many blocks are left?



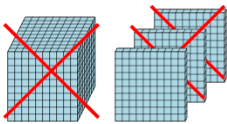
a	b	c
100	803	2920
d	e	f
5346	2950	99

6 How many blocks are left?



a	b	c
1900	1760	1298
d	e	f
100	2091	1000

7 How many blocks are left?



a	b	c
960	900	60
d	e	f
1697	2700	100