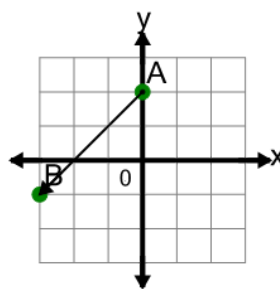




Math worksheet on 'Cartesian Grid - Direction Between Points (Angle) (Level 4)'. Part of a broader unit on 'Cartesian Grid Distance - Intro'

Learn online: app.mobius.academy/math/units/cartesian_grid_distance_intro/

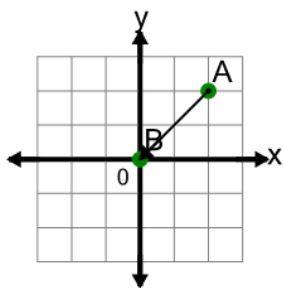
1



Find the direction to go from point A to point B on the diagram

- a Left 3, Down 3
- b Left 3, Down 4
- c Right 3, Down 3
- d Left 3, Down 2
- e Left 3, Up 3
- f Left 2, Down 3

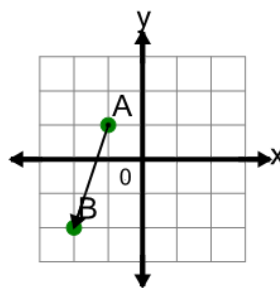
2



Find the direction to go from point A to point B on the diagram

- a Left 2, Up 2
- b Left 2, Down 1
- c Left 1, Down 2
- d Right 2, Down 2
- e Left 2, Down 2
- f Left 3, Down 2

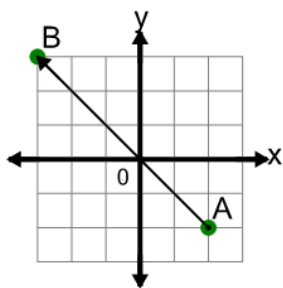
3



Find the direction to go from point A to point B on the diagram

- a Left 3, Up 1
- b Down 3
- c Right 1, Down 3
- d Left 1, Down 2
- e Left 1, Up 3
- f Left 1, Down 3

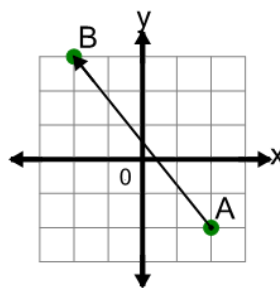
4



Find the direction to go from point A to point B on the diagram

- a Left 4, Up 5
- b Left 5, Up 6
- c Left 6, Up 5
- d Right 5, Up 5
- e Left 5, Up 4
- f Left 5, Up 5

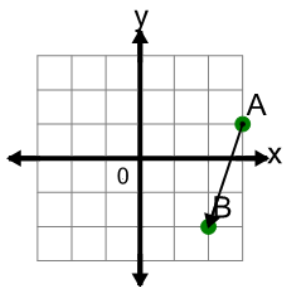
5



Find the direction to go from point A to point B on the diagram

- a Left 5, Down 4
- b Left 3, Up 5
- c Left 4, Up 6
- d Right 4, Up 5
- e Left 4, Up 5
- f Right 5, Up 4

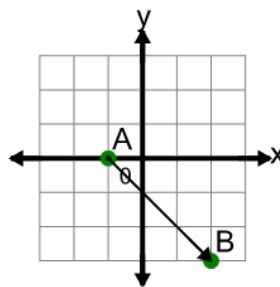
6



Find the direction to go from point A to point B on the diagram

- a Left 1, Down 2
- b Down 3
- c Left 3, Up 1
- d Left 1, Down 4
- e Left 2, Down 3
- f Left 1, Down 3

7



Find the direction to go from point A to point B on the diagram

- a Left 3, Up 3
- b Right 3, Up 3
- c Right 3, Down 2
- d Right 3, Down 3
- e Left 3, Down 3
- f Right 3, Down 4