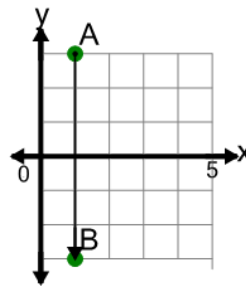




Math worksheet on 'Cartesian Grid - Direction Between Points (Straight) (Level 2)'. Part of a broader unit on 'Cartesian Grid Basics - Intro'

Learn online: app.mobius.academy/math/units/cartesian_grid_basics/

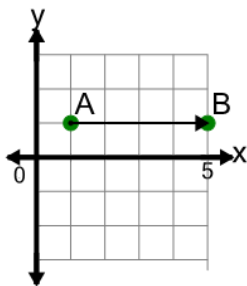
1



Find the direction to go from point A to point B on the diagram

- | | |
|---|-----------------|
| a | Down 6 |
| b | Left 6 |
| c | Up 6 |
| d | Down 5 |
| e | Left 1, Down 6 |
| f | Right 1, Down 6 |

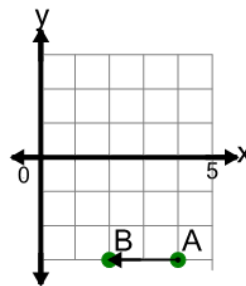
2



Find the direction to go from point A to point B on the diagram

- | | |
|---|---------------|
| a | Right 3 |
| b | Left 4 |
| c | Right 5 |
| d | Up 4 |
| e | Right 4, Up 1 |
| f | Right 4 |

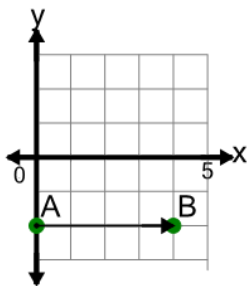
3



Find the direction to go from point A to point B on the diagram

- | | |
|---|----------------|
| a | Left 2 |
| b | Down 2 |
| c | Left 2, Down 1 |
| d | Left 1 |
| e | Right 2 |
| f | Left 3 |

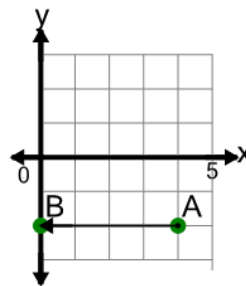
4



Find the direction to go from point A to point B on the diagram

- | | |
|---|-----------------|
| a | Left 4 |
| b | Right 4 |
| c | Right 4, Down 1 |
| d | Up 4 |
| e | Right 4, Up 1 |
| f | Right 3 |

5

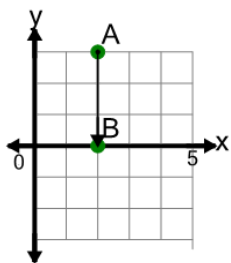


Find the direction to go from point A to point B on the diagram

- | | |
|---|--------------|
| a | Left 3 |
| b | Left 5 |
| c | Right 4 |
| d | Left 4 |
| e | Up 4 |
| f | Left 4, Up 1 |

6

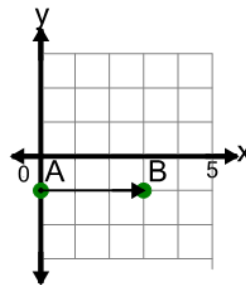
Find the direction to go from point A to point B on the diagram



- | | | | |
|---|---------|---|--------|
| a | Right 3 | b | Down 4 |
| c | Down 3 | d | Down 2 |
| e | Left 3 | f | Up 3 |

7

Find the direction to go from point A to point B on the diagram



- | | |
|---|-----------------|
| a | Right 2 |
| b | Up 3 |
| c | Left 3 |
| d | Down 3 |
| e | Right 3 |
| f | Right 3, Down 1 |