

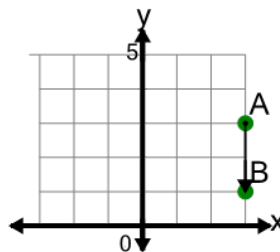


Math worksheet on 'Cartesian Grid - Direction Between Points (Straight) (Level 3)'. Part of a broader unit on 'Cartesian Grid Basics - Intro'

Learn online: app.mobius.academy/math/units/cartesian_grid_basics/

1

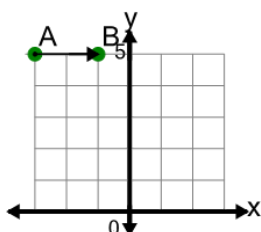
Find the direction to go from point A to point B on the diagram



- | | |
|---|----------------|
| a | Up 2 |
| b | Down 2 |
| c | Left 1, Down 2 |
| d | Down 1 |
| e | Left 2 |
| f | Down 3 |

2

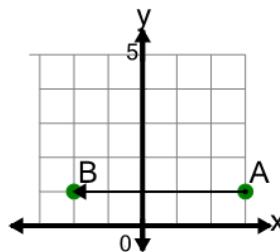
Find the direction to go from point A to point B on the diagram



- | | | | |
|---|--------|---|---------|
| a | Left 2 | b | Right 2 |
| c | Up 2 | d | Right 1 |
| e | Down 2 | f | Right 3 |

3

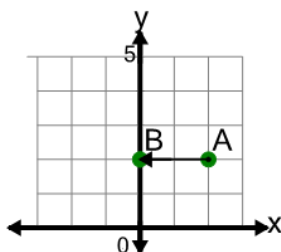
Find the direction to go from point A to point B on the diagram



- | | |
|---|--------------|
| a | Left 5, Up 1 |
| b | Left 5 |
| c | Down 5 |
| d | Right 5 |
| e | Left 4 |
| f | Left 6 |

4

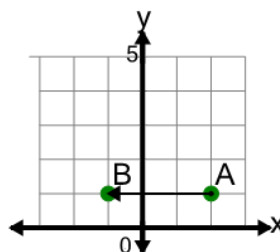
Find the direction to go from point A to point B on the diagram



- | | |
|---|--------------|
| a | Left 3 |
| b | Left 2, Up 1 |
| c | Up 2 |
| d | Left 2 |
| e | Left 1 |
| f | Down 2 |

5

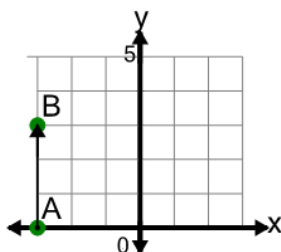
Find the direction to go from point A to point B on the diagram



- | | |
|---|--------------|
| a | Left 3, Up 1 |
| b | Right 3 |
| c | Left 4 |
| d | Down 3 |
| e | Left 3 |
| f | Left 2 |

6

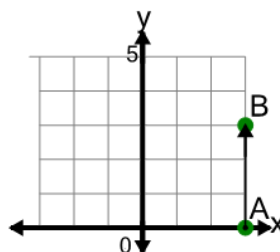
Find the direction to go from point A to point B on the diagram



- | | |
|---|---------------|
| a | Up 3 |
| b | Right 1, Up 3 |
| c | Up 4 |
| d | Right 3 |
| e | Up 2 |
| f | Down 3 |

7

Find the direction to go from point A to point B on the diagram



- | | |
|---|---------------|
| a | Right 3 |
| b | Up 3 |
| c | Left 1, Up 3 |
| d | Up 2 |
| e | Right 1, Up 3 |
| f | Up 4 |