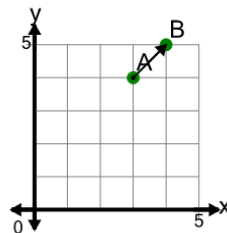




Math worksheet on 'Cartesian Grid - Distance Between Points (Angle) (Level 1)'. Part of a broader unit on 'Cartesian Grid Distance - Intro'

Learn online: app.mobius.academy/math/units/cartesian_grid_distance_intro/

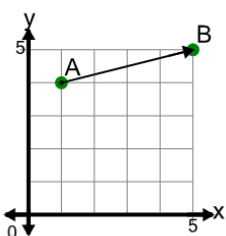
1



Find the distance between point A and point B on the diagram

a	4.77	b	1
c	1.95	d	2
e	3.09	f	1.41

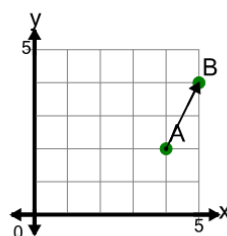
2



Find the distance between point A and point B on the diagram

a	4.12	b	4
c	4.96	d	6.64
e	5	f	7.48

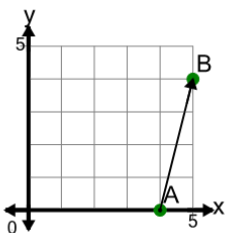
3



Find the distance between point A and point B on the diagram

a	5.6	b	1
c	2.24	d	3.08
e	4.76	f	1.4

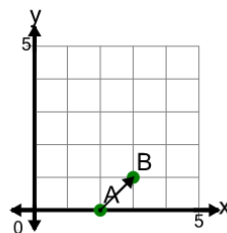
4



Find the distance between point A and point B on the diagram

a	3.28	b	2.44
c	5	d	3.87
e	4.12	f	5.8

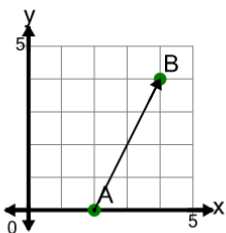
5



Find the distance between point A and point B on the diagram

a	2.79	b	1.41
c	1.95	d	2
e	1.11	f	1

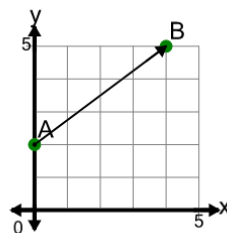
6



Find the distance between point A and point B on the diagram

a	2.79	b	1.95
c	1	d	4.47
e	3.46	f	8

7



Find the distance between point A and point B on the diagram

a	7.52	b	7
c	5	d	4.16
e	2.65	f	12