

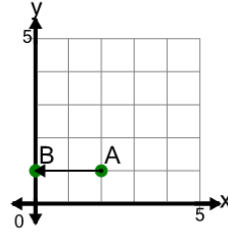


Math worksheet on 'Cartesian Grid - Distance Between Points (Straight) (Level 1)'. Part of a broader unit on 'Cartesian Grid Basics - Intro'

Learn online: app.mobius.academy/math/units/cartesian_grid_basics/

1

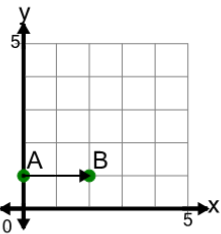
Find the distance between point A and point B on the diagram



a	4	b	3
c	1	d	2
e	5	f	0

2

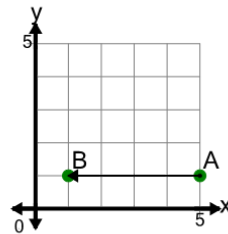
Find the distance between point A and point B on the diagram



a	2	b	5
c	4	d	3
e	1		

3

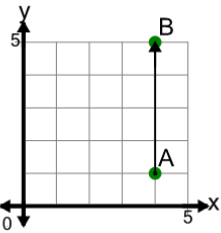
Find the distance between point A and point B on the diagram



a	2	b	7
c	3	d	1
e	6	f	4

4

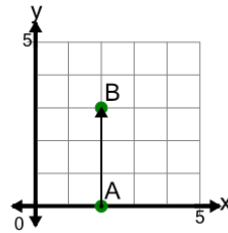
Find the distance between point A and point B on the diagram



a	7	b	5
c	6	d	4
e	0	f	3

5

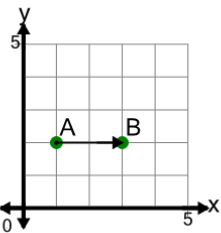
Find the distance between point A and point B on the diagram



a	5	b	6
c	2	d	3
e	1	f	0

6

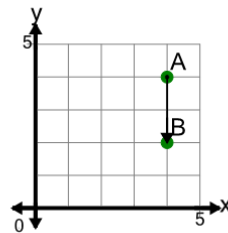
Find the distance between point A and point B on the diagram



a	4	b	5
c	2	d	1
e	0	f	3

7

Find the distance between point A and point B on the diagram



a	1	b	4
c	0	d	3
e	5	f	2