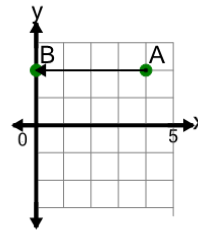




Math worksheet on 'Cartesian Grid - Distance Between Points (Straight) (Level 2)'. Part of a broader unit on 'Cartesian Grid Basics - Intro'

Learn online: app.mobius.academy/math/units/cartesian_grid_basics/

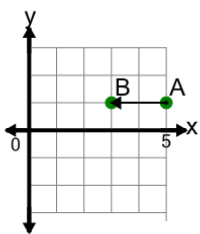
1



Find the distance between point A and point B on the diagram

a	5	b	4
c	2	d	7
e	3	f	6

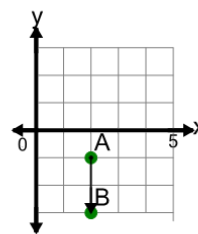
2



Find the distance between point A and point B on the diagram

a	5	b	1
c	3	d	2
e	0		

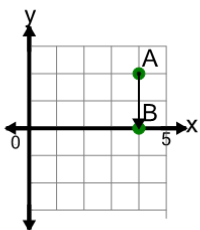
3



Find the distance between point A and point B on the diagram

a	4	b	2
c	1	d	5
e	0	f	3

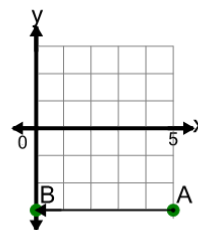
4



Find the distance between point A and point B on the diagram

a	2	b	5
c	1	d	3
e	0		

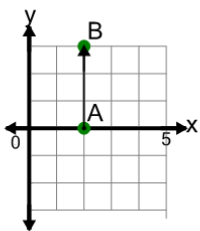
5



Find the distance between point A and point B on the diagram

a	0	b	7
c	6	d	8
e	3	f	5

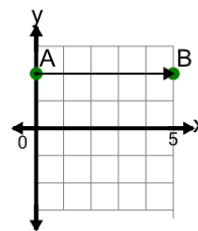
6



Find the distance between point A and point B on the diagram

a	1	b	4
c	0	d	5
e	3	f	6

7



Find the distance between point A and point B on the diagram

a	0	b	1
c	3	d	5
e	2	f	8