

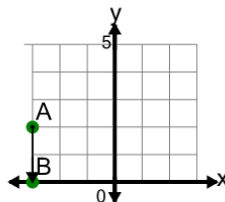


Math worksheet on 'Cartesian Grid - Distance Between Points (Straight) (Level 3)'. Part of a broader unit on 'Cartesian Grid Basics - Intro'

Learn online: app.mobius.academy/math/units/cartesian_grid_basics/

1

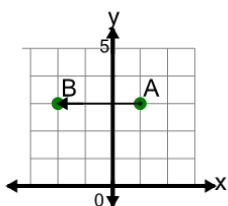
Find the distance between point A and point B on the diagram



a	5	b	4
c	2	d	1
e	3	f	0

2

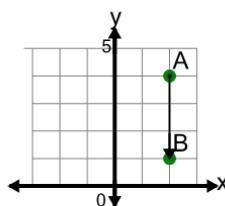
Find the distance between point A and point B on the diagram



a	3	b	0
c	6	d	1
e	2	f	5

3

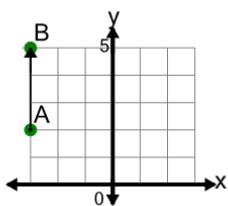
Find the distance between point A and point B on the diagram



a	1	b	2
c	6	d	5
e	0	f	3

4

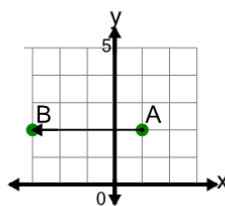
Find the distance between point A and point B on the diagram



a	2	b	6
c	1	d	5
e	4	f	3

5

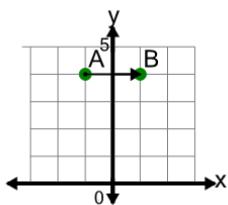
Find the distance between point A and point B on the diagram



a	4	b	2
c	3	d	5
e	1	f	7

6

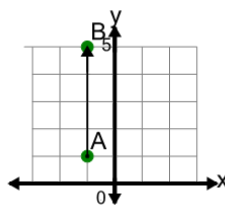
Find the distance between point A and point B on the diagram



a	4	b	0
c	2	d	3
e	1		

7

Find the distance between point A and point B on the diagram



a	0	b	2
c	1	d	4
e	7	f	6