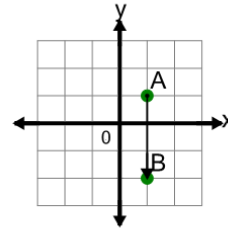




Math worksheet on 'Cartesian Grid - Distance Between Points (Straight) (Level 4)'. Part of a broader unit on 'Cartesian Grid Distance - Intro'

Learn online: app.mobius.academy/math/units/cartesian_grid_distance_intro/

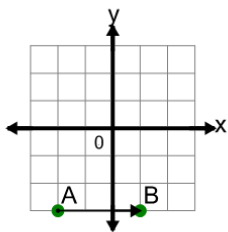
1



Find the distance between point A and point B on the diagram

a	6	b	0
c	3	d	1
e	2	f	4

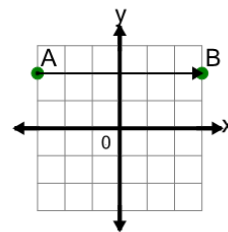
2



Find the distance between point A and point B on the diagram

a	5	b	0
c	2	d	1
e	6	f	3

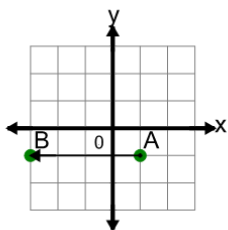
3



Find the distance between point A and point B on the diagram

a	8	b	7
c	9	d	3
e	2	f	6

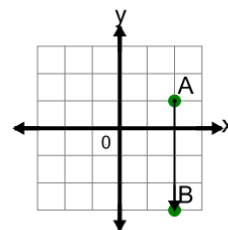
4



Find the distance between point A and point B on the diagram

a	2	b	1
c	0	d	3
e	4	f	7

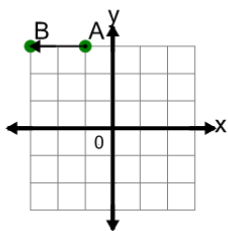
5



Find the distance between point A and point B on the diagram

a	1	b	7
c	4	d	2
e	6	f	5

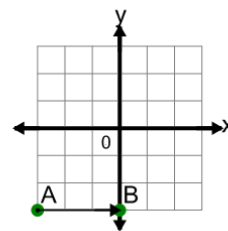
6



Find the distance between point A and point B on the diagram

a	2	b	5
c	4	d	1
e	0	f	3

7



Find the distance between point A and point B on the diagram

a	4	b	3
c	6	d	1
e	0	f	5