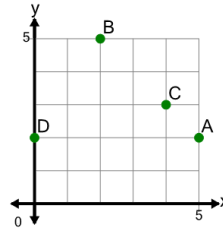




Math worksheet on 'Cartesian Grid - Points - Reversed (Level 1)'. Part of a broader unit on 'Cartesian Grid Geometry Logic - Intro'

Learn online: app.mobius.academy/math/units/cartesian_grid_geometry_logic/

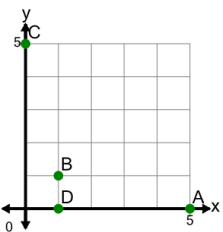
1



Identify which point is at (x,y) location (2,5)

a	B	b	A
c	D	d	C

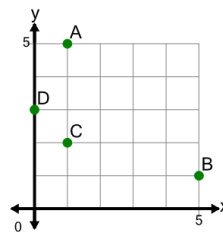
2



Identify which point is at (x,y) location (0,5)

a	A	b	B
c	D	d	C

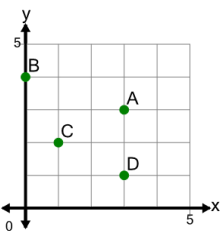
3



Identify which point is at (x,y) location (1,5)

a	A	b	C
c	D	d	B

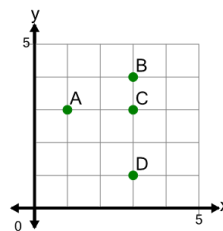
4



Identify which point is at (x,y) location (3,3)

a	A	b	D
c	C	d	B

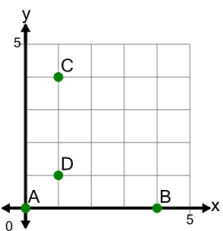
5



Identify which point is at (x,y) location (3,1)

a	C	b	A
c	D	d	B

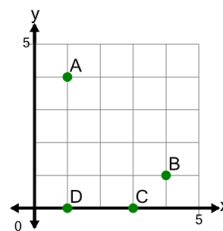
6



Identify which point is at (x,y) location (0,0)

a	A	b	B
c	D	d	C

7



Identify which point is at (x,y) location (1,4)

a	A	b	D
c	C	d	B