

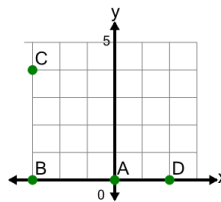


Math worksheet on 'Cartesian Grid - Points - Reversed (Level 3)'. Part of a broader unit on 'Cartesian Grid Foundations'

Learn online: app.mobius.academy/math/units/cartesian_grid_foundations/

1

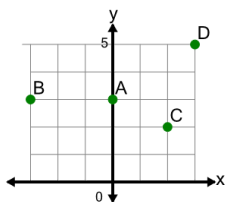
Identify which point is at (x,y) location (-3,4)



a	A	b	B
c	D	d	C

2

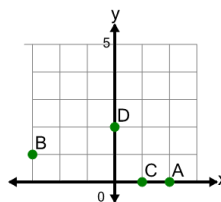
Identify which point is at (x,y) location (3,5)



a	D	b	A
c	B	d	C

3

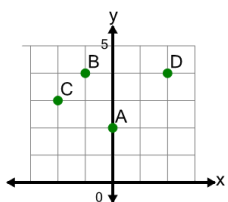
Identify which point is at (x,y) location (0,2)



a	A	b	D
c	B	d	C

4

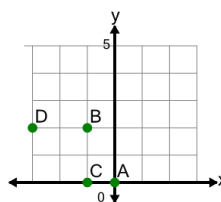
Identify which point is at (x,y) location (2,4)



a	A	b	C
c	B	d	D

5

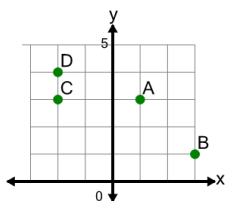
Identify which point is at (x,y) location (-1,0)



a	B	b	A
c	D	d	C

6

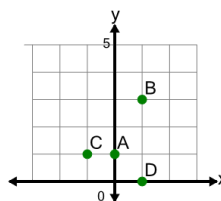
Identify which point is at (x,y) location (1,3)



a	C	b	B
c	D	d	A

7

Identify which point is at (x,y) location (1,0)



a	A	b	C
c	D	d	B