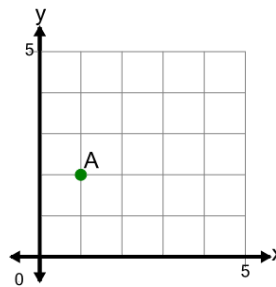




Math worksheet on 'Cartesian Grid - X and Y values of Points (Level 1)'. Part of a broader unit on 'Cartesian Grid Foundations'

Learn online: [app.mobius.academy/math/units/cartesian\\_grid\\_foundations/](http://app.mobius.academy/math/units/cartesian_grid_foundations/)

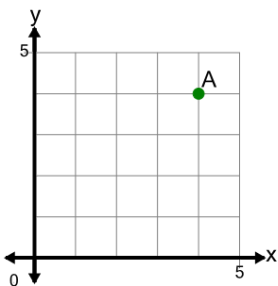
1



Identify the values of 'x' and 'y' for the point labelled 'A'

- a**  $x = 1, y = 2$
- b**  $x = -1, y = 2$
- c**  $x = -2, y = 1$
- d**  $x = 1, y = -2$
- e**  $x = 2, y = 1$
- f**  $x = 2, y = 2$

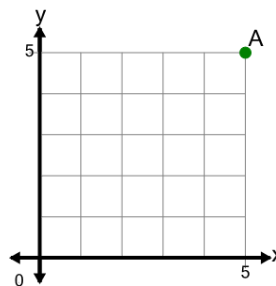
2



Identify the values of 'x' and 'y' for the point labelled 'A'

- a**  $x = 5, y = 4$
- b**  $x = -4, y = 4$
- c**  $x = 4, y = 5$
- d**  $x = 4, y = -4$
- e**  $x = 4, y = 4$

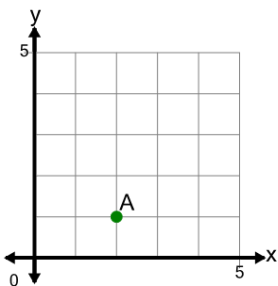
3



Identify the values of 'x' and 'y' for the point labelled 'A'

- a**  $x = -5, y = 5$
- b**  $x = 5, y = 5$
- c**  $x = 6, y = 5$
- d**  $x = 5, y = 6$
- e**  $x = 5, y = -5$

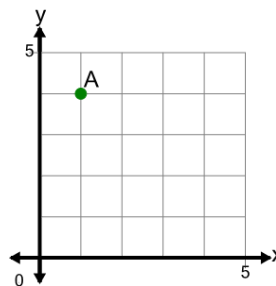
4



Identify the values of 'x' and 'y' for the point labelled 'A'

- a**  $x = 2, y = 1$
- b**  $x = -2, y = 1$
- c**  $x = 1, y = -2$
- d**  $x = 1, y = 2$
- e**  $x = 3, y = 1$
- f**  $x = 2, y = 2$

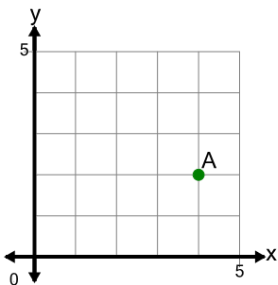
5



Identify the values of 'x' and 'y' for the point labelled 'A'

- a**  $x = 2, y = 4$
- b**  $x = 1, y = 5$
- c**  $x = 1, y = 4$
- d**  $x = -1, y = 4$
- e**  $x = 4, y = 1$
- f**  $x = -4, y = 1$

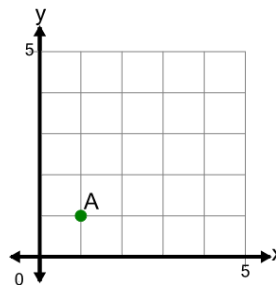
6



Identify the values of 'x' and 'y' for the point labelled 'A'

- a**  $x = 4, y = 2$
- b**  $x = 2, y = 4$
- c**  $x = 4, y = -2$
- d**  $x = 4, y = 3$
- e**  $x = 2, y = -4$
- f**  $x = 5, y = 2$

7



Identify the values of 'x' and 'y' for the point labelled 'A'

- a**  $x = 1, y = 1$
- b**  $x = 1, y = -1$
- c**  $x = 2, y = 1$
- d**  $x = -1, y = 1$
- e**  $x = 1, y = 2$