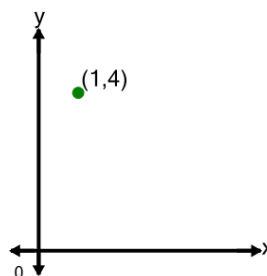




Math worksheet on 'Cartesian Grid - Meaning of X Coordinate (no grid) (Level 1)'. Part of a broader unit on 'Cartesian Grid Foundations'

Learn online: [app.mobius.academy/math/units/cartesian\\_grid\\_foundations/](http://app.mobius.academy/math/units/cartesian_grid_foundations/)

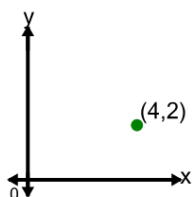
1



What does the value 1 in the point's coordinate mean?

- a** x is equal to 1
- b** y is equal to 1
- c** x is equal to -1
- d** y is equal to -1

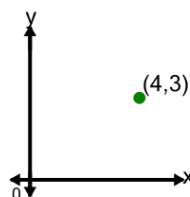
2



What does the value 4 in the point's coordinate mean?

- a** y is equal to -4
- b** x is equal to 4
- c** x is equal to -4
- d** y is equal to 4

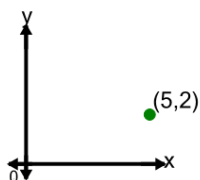
3



What does the value 4 in the point's coordinate mean?

- a** x is equal to -4
- b** y is equal to 4
- c** x is equal to 4
- d** y is equal to -4

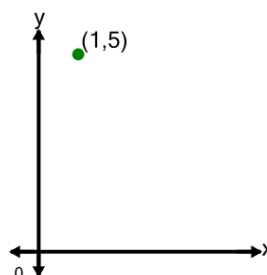
4



What does the value 5 in the point's coordinate mean?

- a** x is equal to 5
- b** x is equal to -5
- c** y is equal to 5
- d** y is equal to -5

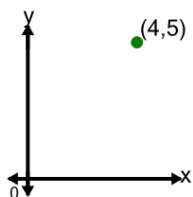
5



What does the value 1 in the point's coordinate mean?

- a** x is equal to -1
- b** y is equal to -1
- c** y is equal to 1
- d** x is equal to 1

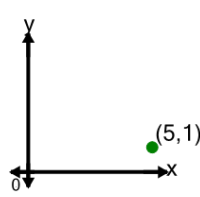
6



What does the value 4 in the point's coordinate mean?

- a** x is equal to -4
- b** y is equal to -4
- c** y is equal to 4
- d** x is equal to 4

7



What does the value 5 in the point's coordinate mean?

- a** y is equal to -5
- b** y is equal to 5
- c** x is equal to -5
- d** x is equal to 5