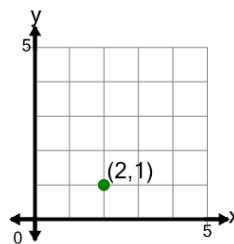




Math worksheet on 'Cartesian Grid - Meaning of X Coordinate (no indicator) (Level 1)'. Part of a broader unit on 'Cartesian Grid Foundations'

Learn online: app.mobius.academy/math/units/cartesian_grid_foundations/

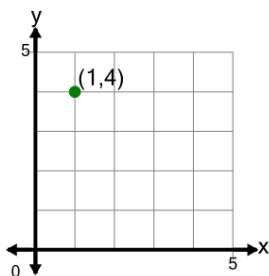
1



What does the value 2 in the point's coordinate mean?

- a y is equal to 2
- b x is equal to -2
- c y is equal to -2
- d x is equal to 2

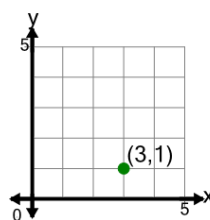
2



What does the value 1 in the point's coordinate mean?

- a y is equal to -1
- b x is equal to -1
- c x is equal to 1
- d y is equal to 1

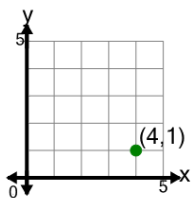
3



What does the value 3 in the point's coordinate mean?

- a x is equal to -3
- b x is equal to 3
- c y is equal to 3
- d y is equal to -3

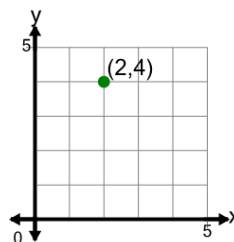
4



What does the value 4 in the point's coordinate mean?

- a y is equal to 4
- b y is equal to -4
- c x is equal to 4
- d x is equal to -4

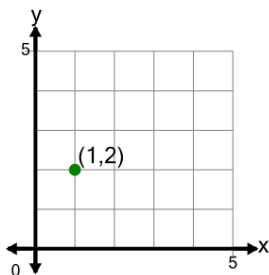
5



What does the value 2 in the point's coordinate mean?

- a x is equal to 2
- b y is equal to 2
- c y is equal to -2
- d x is equal to -2

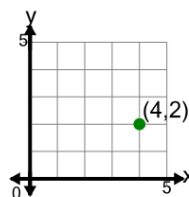
6



What does the value 1 in the point's coordinate mean?

- a x is equal to -1
- b x is equal to 1
- c y is equal to 1
- d y is equal to -1

7



What does the value 4 in the point's coordinate mean?

- a x is equal to -4
- b x is equal to 4
- c y is equal to 4
- d y is equal to -4