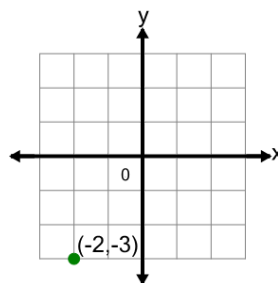




Math worksheet on 'Cartesian Grid - Meaning of X Coordinate (no indicator) (Level 4)'. Part of a broader unit on 'Cartesian Grid Foundations'

Learn online: [app.mobius.academy/math/units/cartesian\\_grid\\_foundations/](http://app.mobius.academy/math/units/cartesian_grid_foundations/)

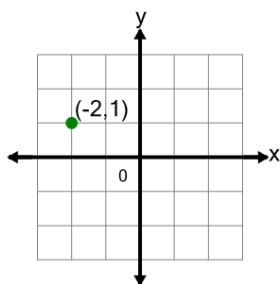
1



What does the value -2 in the point's coordinate mean?

- a** x is equal to -2
- b** y is equal to 2
- c** x is equal to 2
- d** y is equal to -2

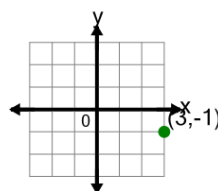
2



What does the value -2 in the point's coordinate mean?

- a** x is equal to 2
- b** x is equal to -2
- c** y is equal to -2
- d** y is equal to 2

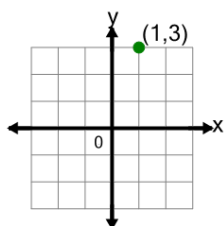
3



What does the value 3 in the point's coordinate mean?

- a** y is equal to -3
- b** y is equal to 3
- c** x is equal to -3
- d** x is equal to 3

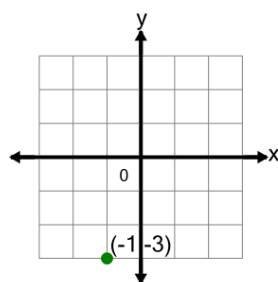
4



What does the value 1 in the point's coordinate mean?

- a** x is equal to -1
- b** x is equal to 1
- c** y is equal to -1
- d** y is equal to 1

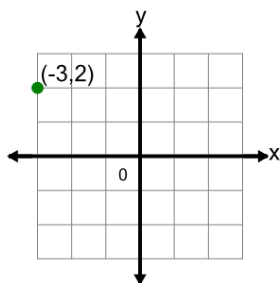
5



What does the value -1 in the point's coordinate mean?

- a** y is equal to 1
- b** x is equal to -1
- c** x is equal to 1
- d** y is equal to -1

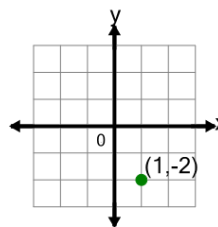
6



What does the value -3 in the point's coordinate mean?

- a** x is equal to -3
- b** y is equal to -3
- c** x is equal to 3
- d** y is equal to 3

7



What does the value 1 in the point's coordinate mean?

- a** x is equal to -1
- b** y is equal to -1
- c** y is equal to 1
- d** x is equal to 1