

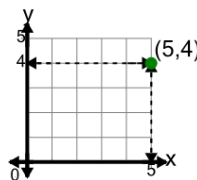


Math worksheet on 'Cartesian Grid - Meaning of X Coordinate (indicator) (Level 1)'. Part of a broader unit on 'Cartesian Grid Foundations'

Learn online: [app.mobius.academy/math/units/cartesian\\_grid\\_foundations/](http://app.mobius.academy/math/units/cartesian_grid_foundations/)

1

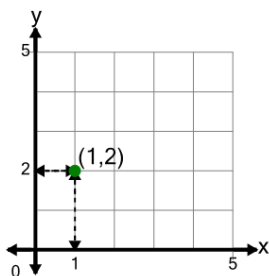
What does the value 5 in the point's coordinate mean?



- a** y is equal to 5
- b** x is equal to 5
- c** x is equal to -5
- d** y is equal to -5

2

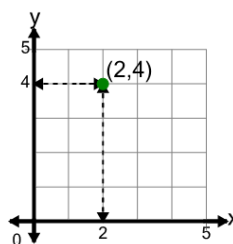
What does the value 1 in the point's coordinate mean?



- a** x is equal to -1
- b** y is equal to -1
- c** y is equal to 1
- d** x is equal to 1

3

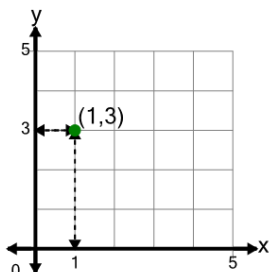
What does the value 2 in the point's coordinate mean?



- a** x is equal to 2
- b** x is equal to -2
- c** y is equal to -2
- d** y is equal to 2

4

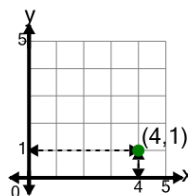
What does the value 1 in the point's coordinate mean?



- a** y is equal to -1
- b** x is equal to -1
- c** x is equal to 1
- d** y is equal to 1

5

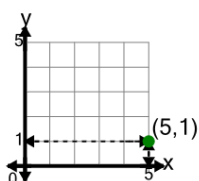
What does the value 4 in the point's coordinate mean?



- a** y is equal to -4
- b** x is equal to 4
- c** y is equal to 4
- d** x is equal to -4

6

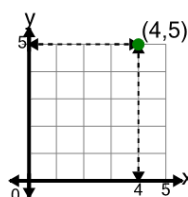
What does the value 5 in the point's coordinate mean?



- a** x is equal to -5
- b** y is equal to 5
- c** x is equal to 5
- d** y is equal to -5

7

What does the value 4 in the point's coordinate mean?



- a** x is equal to -4
- b** y is equal to 4
- c** x is equal to 4
- d** y is equal to -4