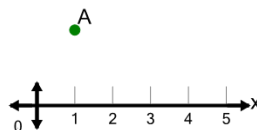




Math worksheet on 'Cartesian Grid - X Coordinate number line (no indicator) (Level 1)'. Part of a broader unit on 'Cartesian Grid Foundations'

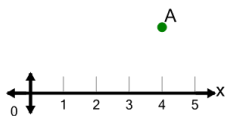
Learn online: app.mobius.academy/math/units/cartesian_grid_foundations/

1 What is the value of 'x' for this point labelled 'A'?



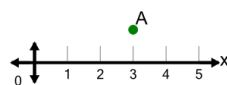
- | | | | |
|---|----------|---|---------|
| a | $x = 2$ | b | $x = 3$ |
| c | $x = 0$ | d | $x = 4$ |
| e | $x = -2$ | f | $x = 1$ |

2 What is the value of 'x' for this point labelled 'A'?



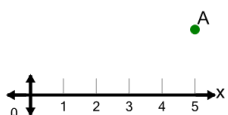
- | | | | |
|---|---------|---|---------|
| a | $x = 1$ | b | $x = 7$ |
| c | $x = 3$ | d | $x = 4$ |
| e | $x = 2$ | f | $x = 6$ |

3 What is the value of 'x' for this point labelled 'A'?



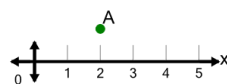
- | | | | |
|---|---------|---|---------|
| a | $x = 3$ | b | $x = 4$ |
| c | $x = 6$ | d | $x = 1$ |
| e | $x = 0$ | f | $x = 5$ |

4 What is the value of 'x' for this point labelled 'A'?



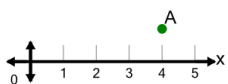
- | | | | |
|---|---------|---|---------|
| a | $x = 4$ | b | $x = 2$ |
| c | $x = 3$ | d | $x = 6$ |
| e | $x = 7$ | f | $x = 5$ |

5 What is the value of 'x' for this point labelled 'A'?



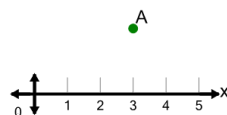
- | | | | |
|---|---------|---|---------|
| a | $x = 0$ | b | $x = 5$ |
| c | $x = 1$ | d | $x = 4$ |
| e | $x = 2$ | f | $x = 3$ |

6 What is the value of 'x' for this point labelled 'A'?



- | | | | |
|---|---------|---|---------|
| a | $x = 1$ | b | $x = 5$ |
| c | $x = 6$ | d | $x = 4$ |
| e | $x = 3$ | f | $x = 7$ |

7 What is the value of 'x' for this point labelled 'A'?



- | | | | |
|---|---------|---|---------|
| a | $x = 3$ | b | $x = 4$ |
| c | $x = 6$ | d | $x = 0$ |
| e | $x = 1$ | f | $x = 5$ |