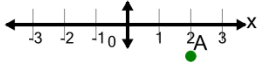




Math worksheet on 'Cartesian Grid - X Coordinate number line (no indicator) (Level 4)'. Part of a broader unit on 'Cartesian Grid Foundations'

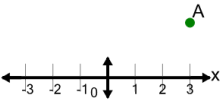
Learn online: [app.mobius.academy/math/units/cartesian\\_grid\\_foundations/](http://app.mobius.academy/math/units/cartesian_grid_foundations/)

**1** What is the value of 'x' for this point labelled 'A'?



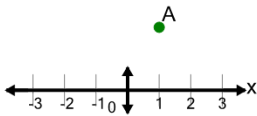
<b>a</b> $x = 0$	<b>b</b> $x = -1$
<b>c</b> $x = 5$	<b>d</b> $x = 4$
<b>e</b> $x = 2$	<b>f</b> $x = 1$

**2** What is the value of 'x' for this point labelled 'A'?




<b>a</b> $x = 0$	<b>b</b> $x = 5$
<b>c</b> $x = 2$	<b>d</b> $x = 4$
<b>e</b> $x = 3$	<b>f</b> $x = 6$

**3** What is the value of 'x' for this point labelled 'A'?



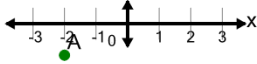
<b>a</b> $x = 2$	<b>b</b> $x = 0$
<b>c</b> $x = 1$	<b>d</b> $x = -2$
<b>e</b> $x = 4$	<b>f</b> $x = 3$

**4** What is the value of 'x' for this point labelled 'A'?



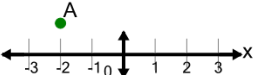
<b>a</b> $x = 0$	<b>b</b> $x = 4$
<b>c</b> $x = 6$	<b>d</b> $x = 3$
<b>e</b> $x = 5$	<b>f</b> $x = 2$

**5** What is the value of 'x' for this point labelled 'A'?




<b>a</b> $x = -4$	<b>b</b> $x = -5$
<b>c</b> $x = -1$	<b>d</b> $x = 0$
<b>e</b> $x = 1$	<b>f</b> $x = -2$

**6** What is the value of 'x' for this point labelled 'A'?



<b>a</b> $x = -2$	<b>b</b> $x = 1$
<b>c</b> $x = -3$	<b>d</b> $x = 0$
<b>e</b> $x = -4$	<b>f</b> $x = -1$

**7** What is the value of 'x' for this point labelled 'A'?



<b>a</b> $x = 3$	<b>b</b> $x = 0$
<b>c</b> $x = 2$	<b>d</b> $x = 5$
<b>e</b> $x = 4$	<b>f</b> $x = -1$