

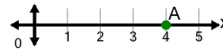


Math worksheet on 'Cartesian Grid - X Coordinate number line (on axis, just number) (Level 2)'. Part of a broader unit on 'Cartesian Grid Foundations'

Learn online: app.mobius.academy/math/units/cartesian_grid_foundations/

1

What is the value of 'x' for this point labelled 'A'?



a	7	b	6
c	4	d	2
e	3	f	5

2

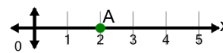
What is the value of 'x' for this point labelled 'A'?



a	1	b	2
c	4	d	0
e	6	f	3

3

What is the value of 'x' for this point labelled 'A'?



a	3	b	4
c	1	d	0
e	2	f	-1

4

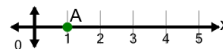
What is the value of 'x' for this point labelled 'A'?



a	3	b	7
c	4	d	2
e	5	f	8

5

What is the value of 'x' for this point labelled 'A'?



a	-1	b	4
c	0	d	1
e	-2	f	2