

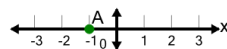


Math worksheet on 'Cartesian Grid - X Coordinate number line (on axis, just number) (Level 3)'. Part of a broader unit on 'Cartesian Grid Foundations'

Learn online: [app.mobius.academy/math/units/cartesian\\_grid\\_foundations/](http://app.mobius.academy/math/units/cartesian_grid_foundations/)

1

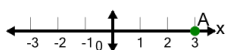
What is the value of 'x' for this point labelled 'A'?



<b>a</b>	-4	<b>b</b>	0
<b>c</b>	2	<b>d</b>	-3
<b>e</b>	1	<b>f</b>	-1

2

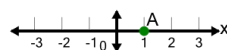
What is the value of 'x' for this point labelled 'A'?



<b>a</b>	5	<b>b</b>	6
<b>c</b>	0	<b>d</b>	3
<b>e</b>	1	<b>f</b>	2

3

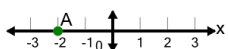
What is the value of 'x' for this point labelled 'A'?



<b>a</b>	2	<b>b</b>	4
<b>c</b>	1	<b>d</b>	3
<b>e</b>	-1		

4

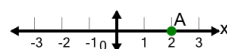
What is the value of 'x' for this point labelled 'A'?



<b>a</b>	-3	<b>b</b>	-4
<b>c</b>	1	<b>d</b>	0
<b>e</b>	-2	<b>f</b>	-5

5

What is the value of 'x' for this point labelled 'A'?



<b>a</b>	5	<b>b</b>	4
<b>c</b>	-1	<b>d</b>	0
<b>e</b>	3	<b>f</b>	2