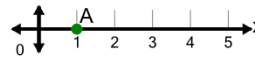




Math worksheet on 'Cartesian Grid - X Coordinate number line (on axis) (Level 1)'. Part of a broader unit on 'Cartesian Grid Foundations'

Learn online: [app.mobius.academy/math/units/cartesian\\_grid\\_foundations/](http://app.mobius.academy/math/units/cartesian_grid_foundations/)

1 What is the value of 'x' for this point labelled 'A'?



a  $x = 3$

b  $x = 0$

c  $x = -2$

d  $x = 1$

e  $x = 4$

f  $x = -1$

2

What is the value of 'x' for this point labelled 'A'?



a  $x = 1$

b  $x = 0$

c  $x = 3$

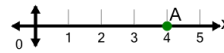
d  $x = 5$

e  $x = 6$

f  $x = 4$

3

What is the value of 'x' for this point labelled 'A'?



a  $x = 4$

b  $x = 2$

c  $x = 5$

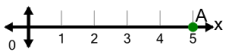
d  $x = 7$

e  $x = 1$

f  $x = 3$

4

What is the value of 'x' for this point labelled 'A'?



a  $x = 8$

b  $x = 6$

c  $x = 7$

d  $x = 5$

e  $x = 4$

f  $x = 2$

5

What is the value of 'x' for this point labelled 'A'?



a  $x = 5$

b  $x = -1$

c  $x = 1$

d  $x = 3$

e  $x = 0$

f  $x = 2$