



Math worksheet on 'Cartesian Grid - X Coordinate number line (on axis) (Level 4)'. Part of a broader unit on 'Cartesian Grid Foundations'

Learn online: app.mobius.academy/math/units/cartesian_grid_foundations/

1 What is the value of 'x' for this point labelled 'A'?



a
 $x = -1$

b
 $x = -2$

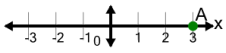
c
 $x = -4$

d
 $x = 0$

e
 $x = -5$

f
 $x = 1$

2 What is the value of 'x' for this point labelled 'A'?



a
 $x = 6$

b
 $x = 2$

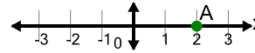
c
 $x = 3$

d
 $x = 0$

e
 $x = 4$

f
 $x = 1$

3 What is the value of 'x' for this point labelled 'A'?



a
 $x = 3$

b
 $x = 2$

c
 $x = 4$

d
 $x = 5$

e
 $x = 0$

f
 $x = -1$

4 What is the value of 'x' for this point labelled 'A'?



a
 $x = -2$

b
 $x = 0$

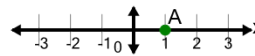
c
 $x = 1$

d
 $x = -4$

e
 $x = -1$

f
 $x = 2$

5 What is the value of 'x' for this point labelled 'A'?



a
 $x = -1$

b
 $x = -2$

c
 $x = 4$

d
 $x = 1$

e
 $x = 3$

f
 $x = 0$