

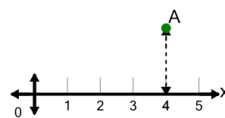


Math worksheet on 'Cartesian Grid - X Coordinate number line (indicator) (Level 1)'. Part of a broader unit on 'Cartesian Grid Foundations'

Learn online: app.mobius.academy/math/units/cartesian_grid_foundations/

1

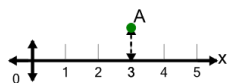
What is the value of 'x' for this point labelled 'A'?



a	$x = 6$	b	$x = 4$
c	$x = 1$	d	$x = 7$
e	$x = 2$	f	$x = 5$

2

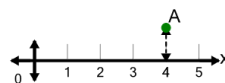
What is the value of 'x' for this point labelled 'A'?



a	$x = 4$	b	$x = 6$
c	$x = 3$	d	$x = 5$
e	$x = 1$	f	$x = 0$

3

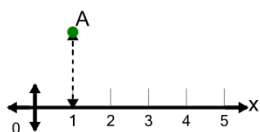
What is the value of 'x' for this point labelled 'A'?



a	$x = 7$	b	$x = 2$
c	$x = 1$	d	$x = 3$
e	$x = 5$	f	$x = 4$

4

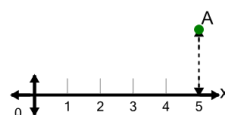
What is the value of 'x' for this point labelled 'A'?



a	$x = 3$	b	$x = 0$
c	$x = 2$	d	$x = -1$
e	$x = -2$	f	$x = 1$

5

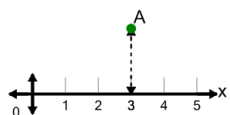
What is the value of 'x' for this point labelled 'A'?



a	$x = 5$	b	$x = 3$
c	$x = 4$	d	$x = 2$
e	$x = 7$	f	$x = 8$

6

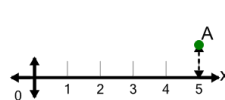
What is the value of 'x' for this point labelled 'A'?



a	$x = 6$	b	$x = 2$
c	$x = 3$	d	$x = 0$
e	$x = 1$	f	$x = 4$

7

What is the value of 'x' for this point labelled 'A'?



a	$x = 3$	b	$x = 4$
c	$x = 2$	d	$x = 6$
e	$x = 5$	f	$x = 7$