

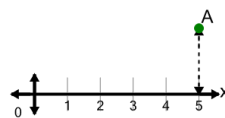


Math worksheet on 'Cartesian Grid - X Coordinate number line (indicator) (Level 2)'. Part of a broader unit on 'Cartesian Grid Foundations'

Learn online: [app.mobius.academy/math/units/cartesian\\_grid\\_foundations/](http://app.mobius.academy/math/units/cartesian_grid_foundations/)

1

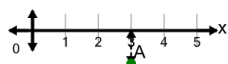
What is the value of 'x' for this point labelled 'A'?



<b>a</b>	$x = 5$	<b>b</b>	$x = 8$
<b>c</b>	$x = 7$	<b>d</b>	$x = 3$
<b>e</b>	$x = 6$	<b>f</b>	$x = 2$

2

What is the value of 'x' for this point labelled 'A'?



<b>a</b>	$x = 5$	<b>b</b>	$x = 6$
<b>c</b>	$x = 3$	<b>d</b>	$x = 4$
<b>e</b>	$x = 1$	<b>f</b>	$x = 0$

3

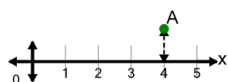
What is the value of 'x' for this point labelled 'A'?



<b>a</b>	$x = 3$	<b>b</b>	$x = 1$
<b>c</b>	$x = 4$	<b>d</b>	$x = 6$
<b>e</b>	$x = 5$	<b>f</b>	$x = 7$

4

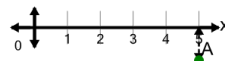
What is the value of 'x' for this point labelled 'A'?



<b>a</b>	$x = 1$	<b>b</b>	$x = 6$
<b>c</b>	$x = 4$	<b>d</b>	$x = 5$
<b>e</b>	$x = 2$	<b>f</b>	$x = 7$

5

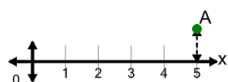
What is the value of 'x' for this point labelled 'A'?



<b>a</b>	$x = 8$	<b>b</b>	$x = 5$
<b>c</b>	$x = 6$	<b>d</b>	$x = 2$
<b>e</b>	$x = 7$	<b>f</b>	$x = 4$

6

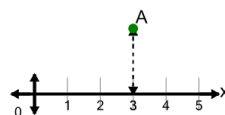
What is the value of 'x' for this point labelled 'A'?



<b>a</b>	$x = 8$	<b>b</b>	$x = 6$
<b>c</b>	$x = 2$	<b>d</b>	$x = 7$
<b>e</b>	$x = 5$	<b>f</b>	$x = 4$

7

What is the value of 'x' for this point labelled 'A'?



<b>a</b>	$x = 6$	<b>b</b>	$x = 4$
<b>c</b>	$x = 0$	<b>d</b>	$x = 3$
<b>e</b>	$x = 5$	<b>f</b>	$x = 1$